



BARNOOTA HERREGAA

KITAABA BARATAA

Kutaa Tokkoffaa

Barreessitootaa fi Gulaaltota

Abarraa Balaay

Daadhii Asaffaa

Addaamuu Nyaaroo

Taaddasaa Gammachuu

Madaaltota

Xilaahun Alamuu

Aliyyi Uluu

Laggasaa Tarrafaa



Ripaabilikii Federaalawaa Dimookiraatawaa
Itoophiyaatti Ministeera Barnootaa



Kan maxxanfame ALI bara 2003 Ripaabilikii Federaalawaa Dimookiraatawaa Itoophiyaatti Ministeera Barnootaa jalatti piroojektii fooyya'insa Barnoota walii-galaatiini dha. Piroojektiin kunis maallaqaan kan deggeramu dhaabbilee IDA credit number 4335-ET, the Fast Track Initiative Catalytic Fund fi Mootummoota Finland, Italy, Netherlands fi United kingdom dha.

© 2011 Mirgi kan Ripaabilikii Federaalawaa Dimookiraatawaa Itoophiyaatti Ministeera Barnootaati. Mirgi hundi eegamaa dha. Kutaan kitaaba kanaa kamtuu hayyama abbaa mirgaa, Ministeera Barnootaa yokiin haala labsii Ripaabillikii Federaalawaa Demookiraatawaa Itoophiyaa, Negaariit Gaazexaa lakkoofsa labsii 410/2004 – labsii qabeenyi sammuu yookiin mirga ollummaan qabu eegsisuun kan inni hayyameef irraa barreeffamaan kennamuun alatti baay'isuun, haala addaatiin itti gargaaramuuf kaawwachuun, elektirooniksiin, magineetiin, sagaleenii fi wantoota kana fakkaatan birootiin baay'isuun yookiin kuusuun dhorkaa dha.

Ministeerri Barnootaa qaamota, gareewwanii fi namoota kitaaba kana maxxansiisuu irratti qooda fudhatanii fi boodas qajeelcha barsiisaa itti dabalan galatoomfachuu barbaada.

Wantoota akka hin fudhatamne mirgi isaanii eegame tokko tokko hayyamnaan kana keessa galaniiru. Abbaa mirgaa wantoota kanaa ta'ee kan sirriitti hin ibsamiin yoo jiraate, Ministeera Barnootaa, Arat-kiioo, Lakkoofsa saanduqaa 1367, Addis Ababa jedhee nuuf barreessuu danda'a.

Developed and Printed by

STAR EDUCATIONAL BOOKS DISTRIBUTORS Pvt. Ltd.

24/4800, Bharat Ram Road, Daryaganj,

New Delhi – 110002, INDIA

and

ASTER NEGA PUBLISHING ENTERPRISE

P.O. Box 21073

ADDIS ABABA, ETHIOPIA

under GEQIP Contract No. ET-MoE/GEQIP/IDA/ICB/G-07/09.

ISBN 978-99944-2-152-7

Baafata

Fuula

Boqonnaa 1

- 1.1 Lakkoofsota lakkaawwii 1 – 5ttii fi tartiiba isaanii..... 1
- 1.2 Lakkofsota lakkaawwii 6 – 9ttii fi tartiiba isaanii 11

Boqonnaa 2

- 2.1 Ida'uu lakkoofsota lakkaawwii kanneen
Ida'amni isaanii 9 hin caalle..... 17
- 2.2 Hir'isuu Lakkoofsota lakkaawwii Hamma 9 tti..... 24
- 2.3 Ida'uu lakkoofsota lakkaawwii sadii kanneen ida'amni
isaanii 9 hin caalle 30

Boqonnaa 3

- 3.1 Lakkoofsa Zeeroo 33
- 3.2 Lakkoofsota Hundaa Hamma 20tti fi Tartiiba isaanii..... 36
- 3.3 Sirna Mana Lakkoofsotaa 40

Boqonnaa 4

- 4.1 Lakoofsota Hamma 20tti Ida'uu 42
- 4.2 Lakkoofsota Hamma 20tti Jiran hir'isuu..... 49
- 4.3 Piroobileemota Ida'uu fi Hir'isuu 53

Boqonnaa 5

- 5.1 Safara Dheerinaa..... 55
- 5.2 Qabee Dhangala'aa Safaruu..... 57
- 5.3 Hanga safaruu 59

Boqonnaa 6

- 6.1 Walakkaawwan 62
- 6.2 Kurmaanota..... 64

Boqonnaa 7

- 7.1 Lakkoofsota Hundaa hamma 20tti jiran Lamaan Baay'isuu..... 66
 7.2 Lakkoofsota guutuu hamma 20tti jiran lamaaf hiruu..... 77

Boqonnaa 8

- 8.1 Sararoota qajeeloo fi sararoota Jajalloo 81
 8.2 Danaalee Sassalphoo 85

Boqonnaa 9

- 9.1 Baay'attoota 10 hamma 100tti 90
 9.2 Lakkoofsota hundaa 21 hamma 100tti jiran 96
 9.3 Tartiiba lakkoofsota hundaa hamma 100tti jiranii..... 98
 9.4 Mana lakkoofsotaa hamma 100tti 102

Boqonnaa 10

- 10.1 Dinaarotaa fi Noottiiwwan 103
 10.2 Hariiroo saantimaa fi Qarshii 104

Boqonnaa 11


- 11.1 Qoqqoodama Guyyaa 108
 11.2 Guyyoota torbanii 110

Boqonnaa 12

- 12.1 Giraafota fakkii sasalphoo 111
 12.2 Paatarnii 114


Boqonnaa 1

LAKKOOF SOTA LAKKAAWWII
HAMMA 9TTI



1.1 Lakkoofsota lakkaawwii 1 – 5 fi tartiiba isaanii

Gocha -1




Gocha -1


Fakkiwwan wal cinaa jiran baayyee yookiin, muraasa jechuun addaan baasuu.

Fakkiwwan wal cinaa jiran irra gudda yookiin irra xiqqaa jechuun waliin madaaluu.

Gocha – 2 Hojii garee



Gilgaala – 1



Gocha – 2 Barattooni, gareedhaan ta'uun beeladoota addaan baasanii lakkaa'uun, kun lakkoofsaan hedduu dha, kun ammoo xiqqaadha jechuun, jechoota hedduu fi xiqqaa jechuu shaakaluu.

Gilgaala -1 Fakkii gabate wal cinaa irraa lakkaa'uun baay'ina isaanii waliin madaaluu. Fkn:- Baay'ina hoolotaa fi sarootaa irra xiqqaa ykn irra guddaa jedhanii waliin madaaluu.

1

2

3

4

5

6

7

8

9

Gocha – 3



1



2



3



4



5

Gocha – 4



1



2



3



4



5

Gocha – 3

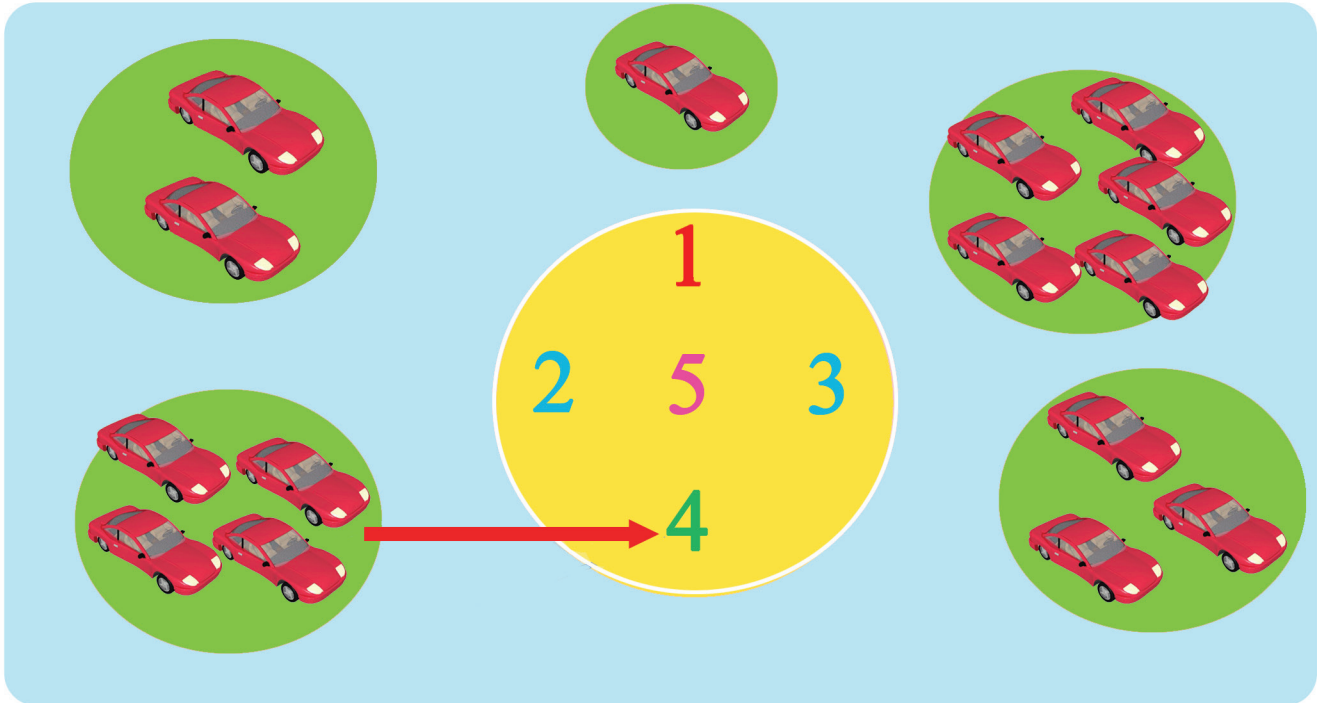
Lakkoosfota 1 – 5tti jiran sagalee ol kaasuudhaan lakkaa’uu. Fakkiwwan lakkoofsota cinaa jiran lakkaa’uun bifa lakkoofsotaa hubatu. Lukkuu lama lakkaa’uun lakkoofsa 2 erga hubatanii booda, quba harkaatiin qilleensa Irratti lakkoofsicha barreessu. Lakkoofsota 1 – 5tti jiran mara haaluma kanaan hojjechuu.

Gocha – 4

Haaluuma fakkii irra jiruun quba harkaa lakkaa’uu fi barreeffama lakkoofsaa hubachuu.



Gilgaala - 2



Gohca – 5 Hojii garee

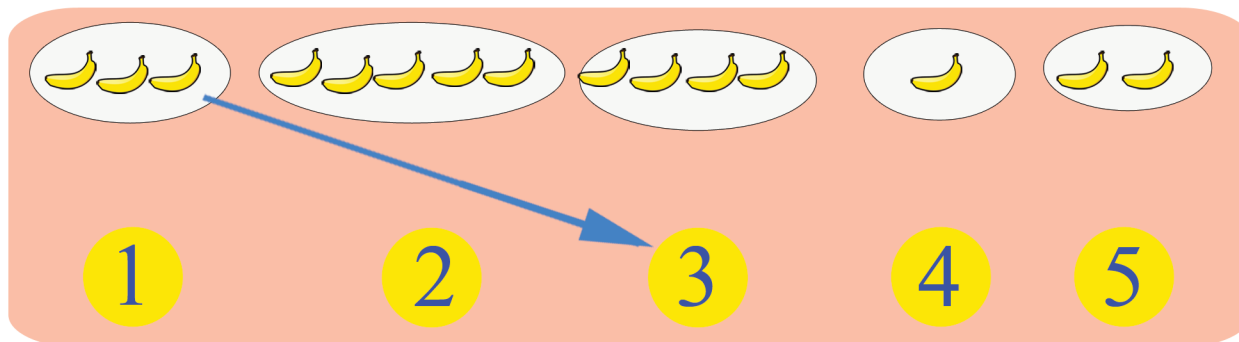
	1	2	3	4	5

Gilgaala-2 Fakkiwwan geengoo keessaa lakkaa'uun lakkoofsota 1 – 5tti kennaman wajjiin walitti firoomsuu.


- Gohca – 5**
- Saddeeqota gabatee irraa bakka adda addaatti 1, 2,3, 4 fi 5 gochuun ramaduu.
 - Qorkii gabatee irraa bakka adda addaatti 1, 2, 3, 4 fi 5 ramaduu.
 - Lakkoofsotaa fi baay'ina fakkiwwanii wal biratti ilaaluun hubachuu.



Gilgaala – 3



Gilgaala – 4



Gilgaala– 3 Baay'ina muuzotaa lakkoofsota 1 – 5tti barreeffamaniin firoomsuu

Gilgaala- 4 Fakkiwwan miila afurii lakkoofsa 4 wajjiinii fi fakkiwwan miila lamaa lakkoofsa 2 wajjiin walitti firoomsuu.






Gilgaala - 5

/	/	/	/	/	/	/	/	/	/
((((((((((
))))))))))

Gilgaala - 6

1	1	1	1					
2	2	2	2					
3	3	3	3					
4	4	4	4					
5	5	5	5					

Gilgaala -7


	1	1	1	_____	_____
	2	_____	_____	_____	_____
	3	_____	_____	_____	_____
	4	_____	_____	_____	_____
	5	_____	_____	_____	_____

Gilgaala 5 • Lakkoofsota barreessuu shaakaluudhaaf mallattoowwan kennaman dabtara isaanii irratti irra deddeebi'uun barreessuu.


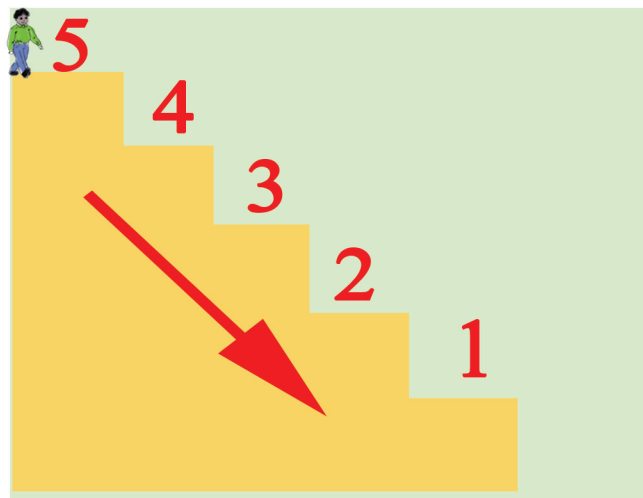
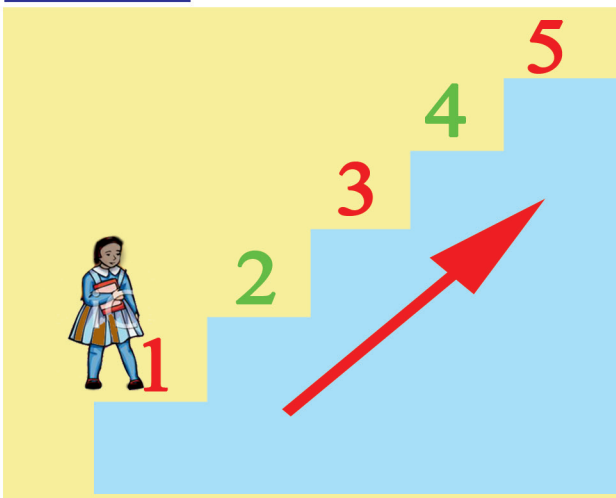
Gilgaala 6 • Lakkoofsota 1 – 5tti jiran quba harkaan qilleensa irratti barreessuun shaakaluu
• Lakkoofsota 1 – 5 tuqaawwan gurracheessuu fi irra deddeebi'uun dabtara irratti barreessuu.

Gilgaala 7 • Fakkii ija bunaa lakkaa'uun baay'ina isaanii lakkoofsaan irra deddeebi'uun dabtra irratti barreessuu.

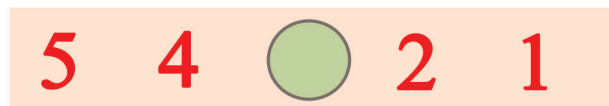

Gilgaala – 8



Gocha -6



Gilgaala – 9







- Gilgaala – 8**
 - Fakkiiwwan lakkaa'uun baay'ina lakkoofsa isaanii bakka duwwaatti barreessuu. Fakkeenya kenname hubadhu.
 - Lakkoofsota 1 – 5tti jiran irra deddeebi'uun sagalee ol kaasuun dubbisuu.
- Gocha -6**
 - Riqaa olbaahuun lakkoofsa 1 irraa eegaluun amma 5tti lakkaa'uu.
 - Riqaa irraa gadi bu'uun 5 irraa eegaluun amma 1tti lakkaa'uu.
- Gilgaala -9**
 - Tartiiba lakkoofsaa hubachuun bakka duwwaa lakkoofsa sirrii ta'een guutuu.

Gilgaala – 10

Gocha -7

Gilgaala – 11

	_____	<input type="text" value="3"/>		_____	<input data-bbox="1316 1458 1404 1543" type="text" value="?"/>
	_____	<input data-bbox="718 1595 805 1688" type="text" value="?"/>		_____	<input data-bbox="1316 1595 1404 1688" type="text" value="?"/>

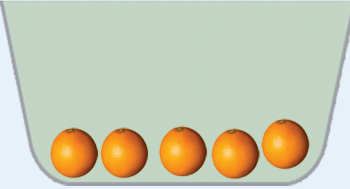





Gilgaala – 10 Baay'ina fakkiiwwanii lakkoofsa 1 – 5tti kan geengoo keessatti kennaman waliin firoomsuu.

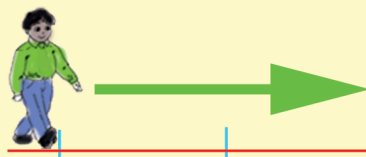
Gocha -7 Baay'ina rogsadeewwanii lakkoofsota geengoo keessatti kennaman waliin firoomsuu.

Gilgaala – 11 Fakkii lakkaa'uun baay'ina isaa bakka duwwaa irratti barreessuu.







Gocha – 8

	$5 > 2$		$>$ $=$ $<$
	$? = ?$		
	$? < ?$		



1	2	3	4	5	$>$ $=$ $<$
	$2 > 1$		$4 > 3$		
			$5 > 4$		

Gilgaala – 12

	$? < ?$	
	$4 ? ?$	

Gocha – 8

Baay'ina burtukaana kachoo keessaa waliin madaaluun mallattoo irra guddaa (>) baruu.

- Baay'ina muuzii bakka lamaanii waliin madaaluun mallattoo walqixaa (=) baruu.
- Gara mirgaatti sarara lakkoofsaa irra yoo deemnu lakkoofsonni dabalaa akka deeman hubachuu.

Gilgaala – 12

Baay'ina fakkii saanduqa duwwaa cinaa jiru keessatti barreessuu, bakka ? jirutti mallattoo >, < ykn = barreessuu.

Gocha – 9

2 < 5

> < =

? ? 4

5 ? ?

Gilgaala – 13

4 > 3	2 ? 1	2 ? 2
4 ? 4	5 ? 5	5 ? 1
2 ? 5	1 ? 4	3 ? 5

Gilgaala – 14

5	4	3	?	1
?	4	3	2	?

5	4	?	?	?
5	?	?	?	1

Gocha – 9

Fakkeenya kenname irratti hundaa’uun, fakkiwwan lakkaa’uu, baay’ina fakkiwwanii bakka duwwa keessatti barreessuu, mallattoo sirrii ta’een waliin madaaluu.

Gilgaala – 13









Mallattoolee hariiroo lakkoofsotaa <, > ykn = bakka duwwaatti barreessuun lakkoofsota waliin madaaluu.

Gilgaala – 14

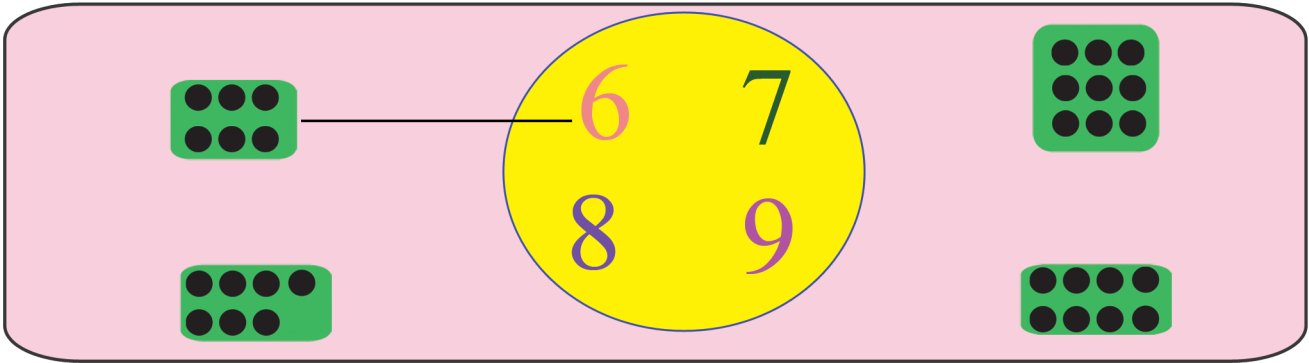
Tartiiba lakkoofsotaa hubachuun bakka duwwaa lakkoofsa sirrii ta’een guutuu.

1.2 Lakkoofsota lakkaawwii 6 – 9tti fi tartiiba isaanii

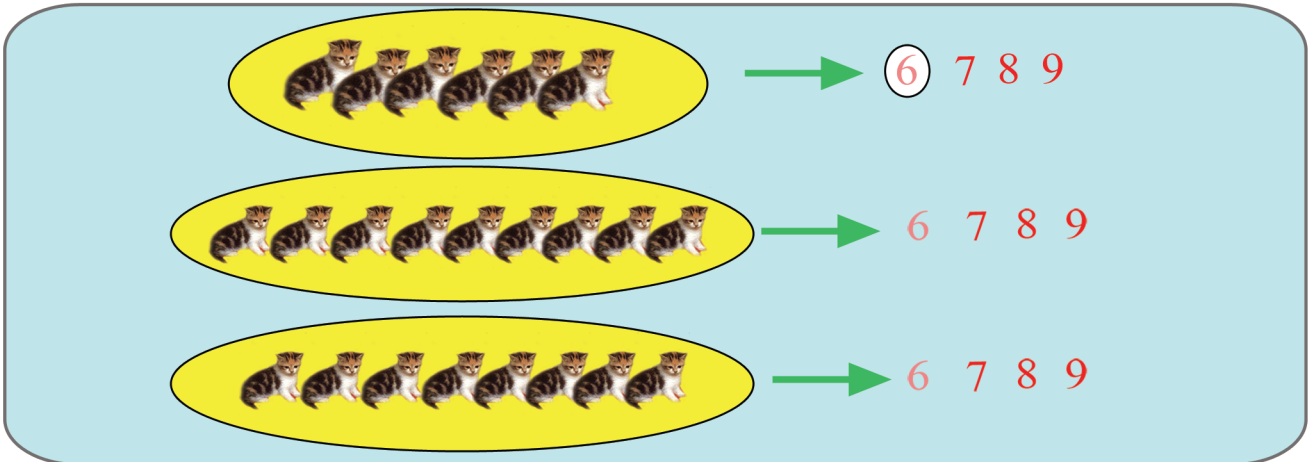
Gocha – 10

	6		
	7		
	8		
	9		

Gilgaala –15



Gilgaala –16



Gocha – 10 Sagalee ol ka'aan 6 – 9tti irra deddeebi'uun dubbisuu. Quba harkaa fi danaa geengoo lakkaa'uu.

Gilgaala – 15 Baay'ina tuqaalee lakkoofsota waliin firoomsuu.

Gilgaala – 16 Fakkiwwan lakkaa'uun lakkoofsa baay'ina isaa mul'isu irra maruu.

1

2

3

4

5

6

7

8

9

Gilgaala- 17

6	6	6	6					
7	7	7	7					
8	8	8	8					
9	9	9	9					

Gilgaala - 18

6 ● ● ● ● ● ●

7

8

9

Gocha -II

1

2

3

?

?

?

7

?

?

1

?

3

?

5

?

?

?

9

1

?

?

?

?

6

7

?

?

?

2

?

4

?

?

?

?

9

Gilgaala- 17

Lakkoofsota tuqaaleen muli'faman gurraachessuu fi irra deddeebi'uun barreessuu.

Gilgaala- 18

Fakkeenya lakkoofsa 6f kenname hordofuun lakkoofsota 7, 8 fi 9 cinaatti geengoowwan gurraacha'oo tarreessuu.

Gocha -II

Bakka duwaa lakkoofsota sirriidhaan gutuu.

**Gilgaala – 19**5 → 4 → 7 → 3 → 8 → 2 → 6 → 1 → **Gocha – 12**

9 8 7 6 5 4 3 2 1

Gilgaala – 20

8 → 9

? → 5

? → 2

? → 6

? → 8

? → 7









Gilgaala – 21**Gilgaala – 19** Lakkoofsa itti aanu saanduqa keessatti barreessuu.

- Dursaa fi itti fufaa jechoota jedhamani shaakaluu.

Gocha – 12 9 irraa jalqabuun gara duubaatti lakkaa'uu, deddeebi'anii shaakaluu.**Gilgaala – 20** Dursaa lakkoofsota kennamanii saanduqa keessatti barreessuu.**Gilgaala – 21** Baay'ina fakkiiwwanii saanduqa duwwa keessatti barreessuu.



Gocha – 13

	5	$>$	$?$	
	$?$	$?$	$?$	
	$?$	$?$	$?$	
	$?$	$?$	$?$	

Gilgala – 22

$9 > 6$	$3 ? 8$	$7 ? 4$	$6 ? 1$
$5 ? 8$	$8 ? 9$	$8 ? 3$	$9 ? 8$

Gocha – 13

Baay'ina fakkiiwwanii saanduqa duwaa keessatti barreesuu. Mallattoolee <, > fi = keessaa isa sirrii ta'e bakka “?” buusuu.

Gilgala – 22

Mallattoo <, > fi = tti fayyadamuun lakkoofsota kennaman waliin madaaluu.



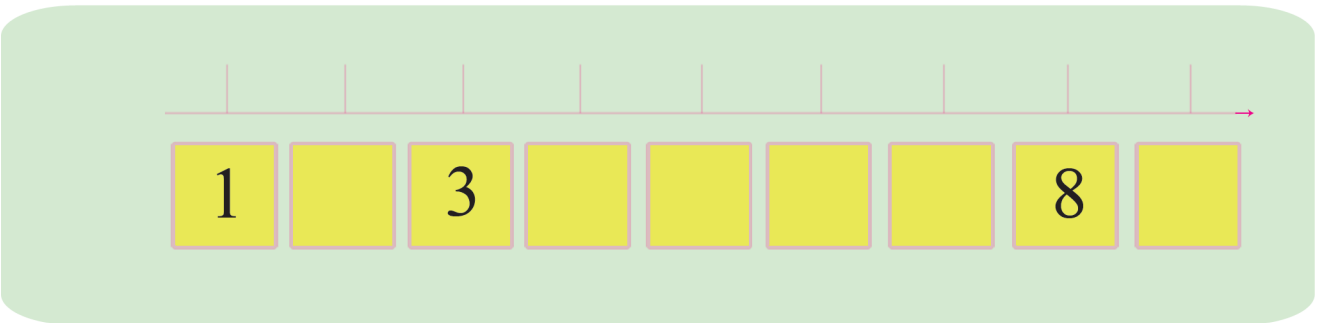

Gocha – 14

Gocha – 14

- Lakkoofsa baay'ina qubaa lakkoofsa baay'ina tuqaalee waliin firoomsuu.
- Adurreewwan lakkaa'uun baay'ina isaanii barreessuu.
- Rogsadeewwan halluu adda addaa qaban lakkaa'uun baay'ina isaanii barreessuu.



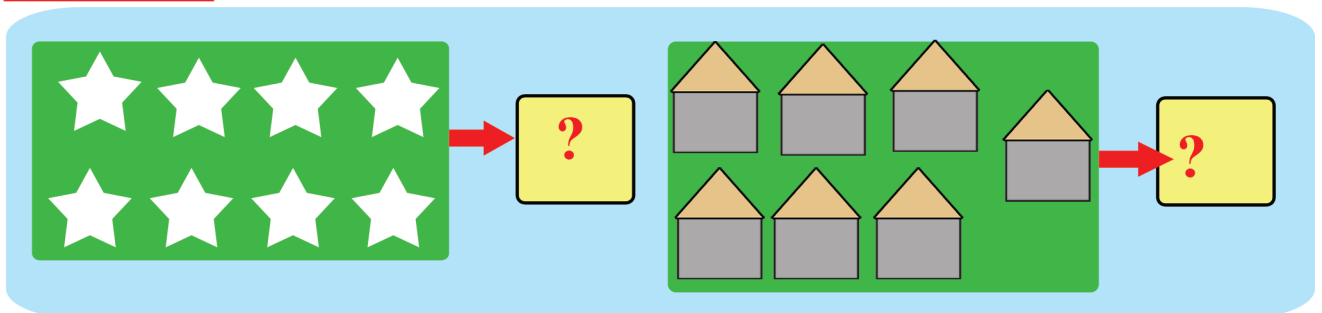
Gocha – 15



Gocha – 16 (Tapha)



Gilgaala – 23



- Gocha – 15** Lakkoofsota hir'atan bakka "?" tti barreessuu.
- Gocha – 16** Tuqaa lakkoofsa 1 irraa eegaluun sararaan walqabsiisuun bakka jalqabaatti deebi'uu.
- Gilgaala – 23** Fakkiwwan lakkaa'uun baay'ina isaanii saanduqoota duwwaa keessatti barreessuu.

Boqonnaa 2

IDA'UU FI HIR'ISUU LAKKOOF SOTA
LAKKAAW WII HAMMA 9TTI


$+$ $-$ $=$
 $2 + 5 = 7$
 $7 - 2 = 5$

2.1 Ida'uu lakkoofsota lakkaawwii kanneen ida'amni isaanii 9 hin caalle

Lakkoofsota 1 – 5tti jiran ida'uu




Gocha – 1




Lakkaa'uu








Ida'uu

Gocha – 2

 $2 + 1$  $=$  3 $2 + 1 = 3$

 $3 + 2$  $=$  $?$ $3 + 2 = 5$










 $2 + 1$  $=$  $?$ $2 + 1 = ?$

 $?$ $+$ $?$  $=$ _____ $?$ $? + ? = 5$





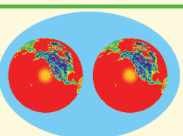





Gocha – 1 Fakkiwwan lakkaa'uun baay'ina isaanii barreessuu.

Gocha – 2 Haala fakkeenya kennameetti fakkiwwan lakkaa'uu,hima ida'uu uumuu fi ida'ama isaanii lakkaa'uun argachuu.

Gilgaala - 1

 +  = 	$1 + 2 = \boxed{?}$
 +  = $\boxed{?}$	$3 + 1 = \boxed{?}$
 +  = $\boxed{?}$	$1 + 4 = \boxed{?}$
 +  = $\boxed{?}$	$2 + 3 = \boxed{?}$

Gilgaala - 2

 + 		$2 + 1 = 3$
$\boxed{2}$ + $\boxed{1}$ = 3		
 + 		$3 + 2 = \boxed{?}$
$\boxed{3}$ + $\boxed{2}$ = $\boxed{?}$		
 + $\boxed{?}$		$2 + \boxed{?} = 4$
$\boxed{?}$ + $\boxed{?}$ = $\boxed{?}$		
 + 	$\boxed{?}$	$3 + 1 = \boxed{?}$
$\boxed{?}$ + $\boxed{?}$ = $\boxed{?}$		

Gilgaala - 1 Tuqaalee lakkaa'uu fi walitti makuun lakkaa'uun ida'ama isaanii argachuu.

Gilgaala - 2 Lakkoofsa saanduqa keessatti barreeffamuu qabu fakkiwwan hordofuun argachuu.

Gocha - 3

$\square + \square = \square$

$? + ? = ?$

$2 + 1 = 3$

$1 + 2 = 3$

$1 + 4 = ?$

$4 + 1 = ?$

$2 + 3 = ?$

$3 + 2 = ?$

Gilgaala- 3

$1 + 3 = ?$

$3 + 1 = ?$

$2 + 1 = ?$

$1 + 2 = ?$

$1 + 4 = ?$

$4 + 1 = ?$

Gocha -3

Ida'amoota wal cinaa jiran waliin madaaluun yaada walii galaa tokko irra ga'uu.

Gilgaala-3

Gaaffilee hima ida'uu hojjechuun ida'amoota waliin madaaluun yaada walii-galaa tokko irra ga'uu.

0

1

2

3

4

5

6

7

8

9

+

-

=

Gocha – 4



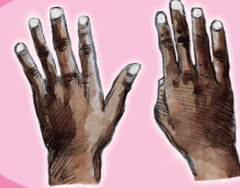
6



?



?



?

Gilgaala – 4



5



?

+

=



?



?



?

+

=



?

$$5 + 1 = \boxed{?}$$

$$5 + 3 = \boxed{?}$$

$$5 + 4 = \boxed{?}$$


$$4 + 5 = \boxed{?}$$

$$3 + 5 = \boxed{?}$$

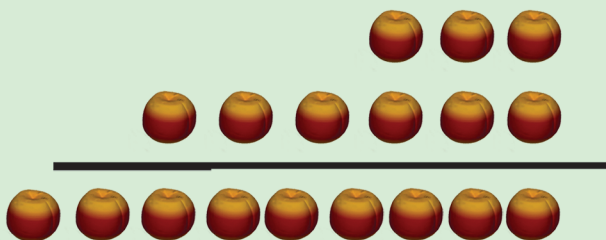
Gocha – 4 Quba harkaa lakkaa'uu

Gilgaala– 4 Quba harkaa lakkaa'uun ida'uu.


Gocha – 5



$$\begin{array}{r} 4 \\ +2 \\ \hline \boxed{6} \end{array}$$



$$\begin{array}{r} 3 \\ +6 \\ \hline \boxed{9} \end{array} \qquad \begin{array}{r} 6 \\ +3 \\ \hline \boxed{} \end{array}$$



$$\begin{array}{r} 2 \\ +5 \\ \hline \boxed{} \end{array} \qquad \begin{array}{r} 5 \\ +2 \\ \hline \boxed{} \end{array}$$

Gilgala – 5

$$\begin{array}{r} 3 \\ +5 \\ \hline \boxed{} \end{array} \qquad \begin{array}{r} ||| \\ |||| \\ \hline ||||| \end{array}$$

$$\begin{array}{r} 5 \\ +4 \\ \hline \boxed{} \end{array} \qquad \begin{array}{r} |||| \\ |||| \\ \hline \end{array}$$

$$\begin{array}{r} 2 \\ +3 \\ \hline \boxed{} \end{array}$$

$$\begin{array}{r} 5 \\ +1 \\ \hline \boxed{} \end{array}$$

$$\begin{array}{r} 6 \\ +3 \\ \hline \boxed{} \end{array}$$

$$\begin{array}{r} 2 \\ +5 \\ \hline \boxed{} \end{array}$$

Gocha – 5

Fakkiwwan kennamanitti fayyadamuun irraa gadee ida'uu.

Gilgala – 5

Sararootatti fayyadamuun irraa gadee ida'uu.

Gilgaala – 6

$4 + 3 = 7$	
$2 + 5 = \boxed{?}$	
$5 + 3 = \boxed{?}$	
$6 + 2 = \boxed{?}$	

Gohca – 6

Madaala akkamiin walqixxeessuun danda'ama?

$2 + \boxed{?} = 8$

Gilgaala – 7

Piroobileemota jechaa

Caalaa + Caaltuu = $\boxed{?}$

$\boxed{?} + 2 = 8$

Gilgaala – 6

Lakkoofsa duraa irraa ka'uun hamma isa lammaffaa gara mirgaatti lakkaa'uun bakka ga'an ilaaluun deebii isaa bakka duwaa Irratti guutuu.

Gocha – 6

Burtukaanonni gara bitaa fi mirgaa jiran walqixa yoo ta'an, guuboo keessa burtukaana meeqatu jira?

Gilgaala – 7

Danaa (fakkii) kennamanitti fayyadamuun piroobileemota jechaa furuu.

Gocha – 7

$$2 + \boxed{?} = 6$$

$$1 + \boxed{?} = 7$$

$$3 + \boxed{?} = 8$$

$$2 + \boxed{?} = 9$$

$$5 + \boxed{?} = 9$$

$$4 + \boxed{?} = 9$$

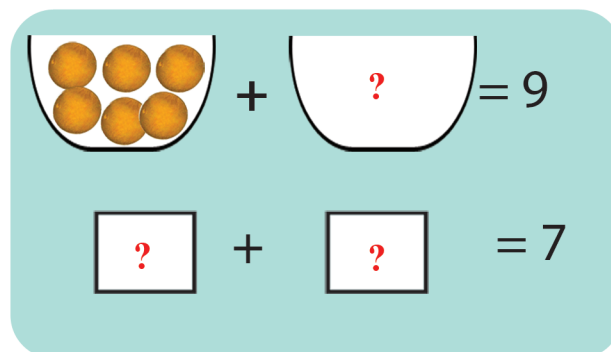
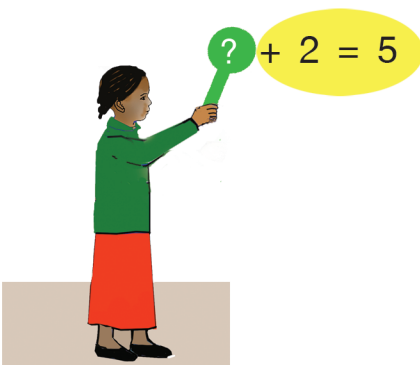
Gilgaala – 8

Ida'amni 5		
1	+	4
2	+	?
3	+	?
4	+	?

Ida'amni 7		
1	+	6
2	+	?
?	+	4
4	+	?

Ida'amni 9		
1	+	8
2	+	?
3	+	?
?	+	4

Gilgaala – 9



Gocha – 7

Bakka duwwaa lakkoofsa sirrii ta'een guutuu.

Gilgaala – 8

Gabateewwan kennaman irratti bakka "?" tti ida'amtoota sirrii ta'an guutuu.

Gilgaala – 9

Fakkiwwan kennaman faana bu'uun piroobileemota Jechaa furuu.

0

1

2

3

4

5

6

7

8

9

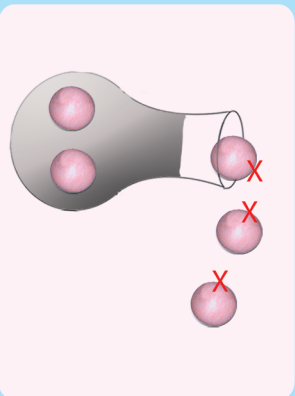
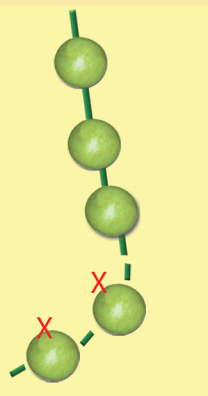
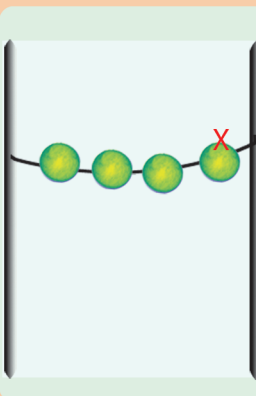
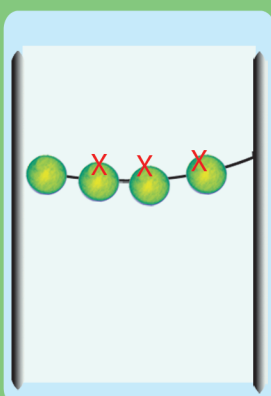
+

-




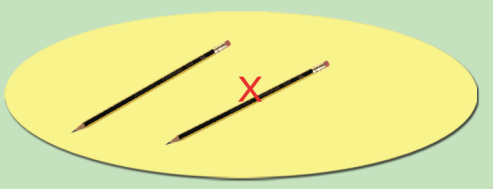
=

2.2 Hir'isuu Lakkoofsota lakkaawwii Hamma 9 tti

Gocha – 8

 <p>$5 - 3 = \boxed{2}$</p>	 <p>$5 - 2 = \boxed{}$</p>	 <p>$4 - 1 = \boxed{}$</p>	 <p>$4 - 3 = \boxed{}$</p>
---	---	--	---

Gilgaala – 10

 <p>$5 - 3 = \boxed{?}$</p>	 <p>$5 - 4 = \boxed{?}$</p>
 <p>$4 - 2 = \boxed{?}$</p>	 <p>$2 - 1 = \boxed{?}$</p>

Gocha – 8 Danaalee ilaaluun firii hima hir'isuu saanduqa duwwaa keessatti barreessuu.

Gilgaala – 10 Caalmaa saanduqa duwwaa keessatti guutuu.

Gilgaala – 11

8
-5
—

7
-4
—

9
-5
—

6
-3
—

Gocha – 9

7 - 2 = ?

? - ? = ?

? - ? = ?

? - ? = ?

Gilgaala – 11 Fakkiwwan irratti hundaa’uun irraan gadee hir’isuu.

Gocha – 9 kubboota hunda, isaan irraa hir’achuu mallattoo "X" n irratti ta'ee fi isaan hafan saanduqoota duwwaa keessatti barreessuu.

0

1

2

3

4

5

6

7

8

9

+

-

=

Gilgala- 12

$3 - 1 =$ <input <="" td="" type="text" value="?"/> <td></td>	
$4 - 3 =$ <input <="" td="" type="text" value="?"/> <td></td>	
$5 - 2 =$ <input <="" td="" type="text" value="?"/> <td></td>	
$5 - 4 =$ <input <="" td="" type="text" value="?"/> <td></td>	
$5 - 2 =$ <input <="" td="" type="text" value="?"/> <td></td>	

$7 - 2 = 5$	
$6 - 5 =$ <input <="" td="" type="text" value="?"/> <td></td>	
$9 - 2 =$ <input <="" td="" type="text" value="?"/> <td></td>	

Gilgala- 13

	9
	$9 - 1 =$ <input type="text" value="8"/>
	$9 - 2 =$ <input <="" td="" type="text" value="?"/>
	$9 - 3 =$ <input <="" td="" type="text" value="?"/>
	$9 - 4 =$ <input <="" td="" type="text" value="?"/>
	$9 - 5 =$ <input <="" td="" type="text" value="?"/>
	$9 - 6 =$ <input <="" td="" type="text" value="?"/>
	$9 - 7 =$ <input <="" td="" type="text" value="?"/>
	$9 - 8 =$ <input <="" td="" type="text" value="?"/>

Gilgala- 12 Caalmaa isaanii saanduqa duwwaa keessatti guutuu.

Gilgala- 13 Fakkiiwwan lakkaa'uun caalmaa lakkoofsotaa shallaguu.

0

1

2

3

4

5

6

7

8

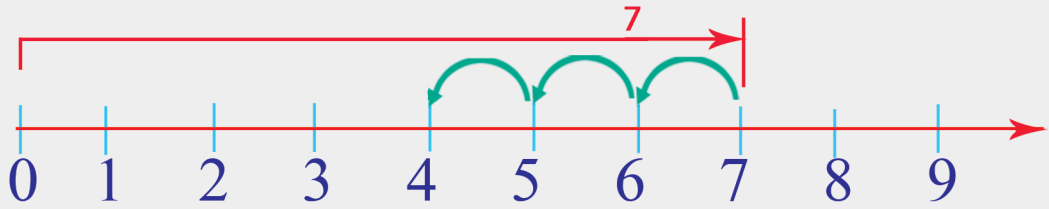
9

+

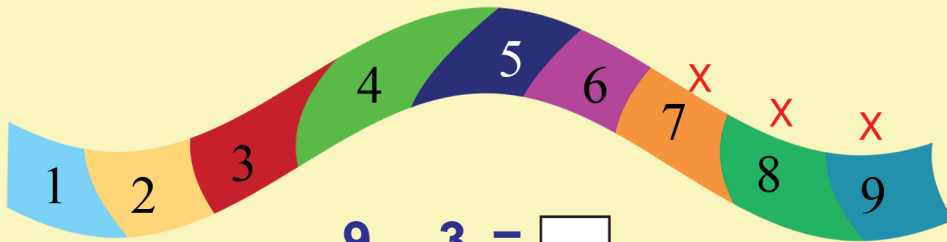
-

=

Gocha - 10



$$7 - 3 = \square$$



$$9 - 3 = \square$$

Gilgaala - 14

$9 - 4 = \square ?$

$8 - 4 = \square ?$

$8 - 2 = \square ?$

$7 - 5 = \square ?$

$9 - 6 = \square ?$

$9 - 1 = \square ?$

$6 - 4 = \square ?$

$7 - 6 = \square ?$

$8 - 6 = \square ?$

Gilgaala - 15

9 - 6 ----- -----	5 - 1 ----- -----	7 - 5 ----- -----	9 - 8 ----- -----	6 - 4 ----- -----
----------------------------	----------------------------	----------------------------	----------------------------	----------------------------

8 - 4 ----- -----	9 - 2 ----- -----	7 - 5 ----- -----	6 - 3 ----- -----	8 - 6 ----- -----
----------------------------	----------------------------	----------------------------	----------------------------	----------------------------

Gocha - 10

Xiyya lakkoofsaa irratti gara bitaatti deemuun hir'isuu.

Gilgaala - 14

Dalga hir'isuu.

Gilgaala - 15

Irraa gadee hir'isuu.

0

1

2

3

4

5

6

7

8

9

+

-

=

Gocha – 11



$$8 - 6 = 2$$

$$8 - 2 = 6$$

$$2 + 6 = \boxed{?}$$



$$7 - 3 = 4$$

$$7 - \boxed{?} = 3$$

$$3 + 4 = \boxed{?}$$



$$9 - \boxed{?} = 5$$

$$9 - \boxed{?} = 4$$

$$4 + 5 = \boxed{?}$$




$$9 - 6 = \boxed{?}$$

$$9 - \boxed{?} = 6$$

$$3 + 6 = \boxed{?}$$


Gocha – 12



$$2 + 5 = \boxed{?}$$

$$7 - 2 = \boxed{?}$$

$$7 - 5 = \boxed{?}$$



$$3 + 5 = \boxed{?}$$

$$8 - 3 = \boxed{?}$$

$$8 - 5 = \boxed{?}$$



$$4 + 5 = \boxed{?}$$

$$9 - 4 = \boxed{?}$$

$$9 - 5 = \boxed{?}$$

Gocha – 11 Saanduqa duwaa guutuun hariiroo ida'uu fi hir'isuu hubachuu.

Gohca – 12 Kubbaalee lakkaa'uun qooyyaba hir'isuu fi ida'uu hojjechuu, hariiroo isaaniis hubachuu.

Gilgaala- 16

8 - 2 = ?

7 - 4 = ?

? - 4 = 3

? - 5 = 4

Gilgaala - 16

Baay'ina ija bunaa okkotee keessaa kan lafa jiru hir'isuun kan hafe barreessuu.

Timaatimni jalqaba okkotee keessa ture meeqa akka ta'e shallaguu.

0

1

2

3

4

5

6

7

8

9

+

-

=

2.3 Ida'uu lakkoofsota lakkaawwii sadii kanneen ida'amni isaanii 9 hin caalle

Gocha – 13



3

+



1

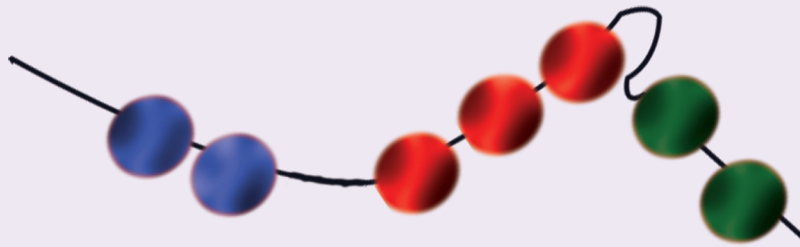
+



2

=

?



2

+

+

?

Gilgaala – 17

$1+2+3= \boxed{?}$

$2+3+4= \boxed{?}$

$1+3+5= \boxed{?}$

$1+1+1= \boxed{?}$

$3+3+3= \boxed{?}$

$2+4+1= \boxed{?}$

$1+1+7= \boxed{?}$

$2+3+1= \boxed{?}$

$1+2+6= \boxed{?}$

$5+1+1= \boxed{?}$

Gocha – 13

Fakkii halluun isaanii tokkichaa walitti ida'uu.

Gilgaala – 17

Lakkoofsota sadi sadi ida'uu.

0

1

2

3

4

5

6

7

8

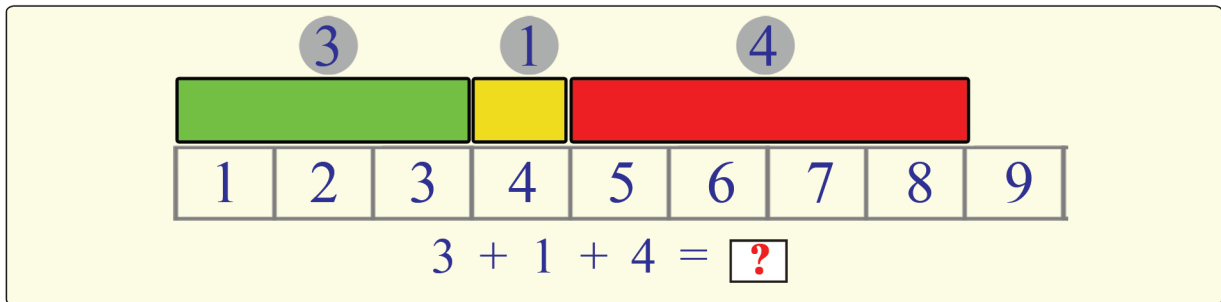
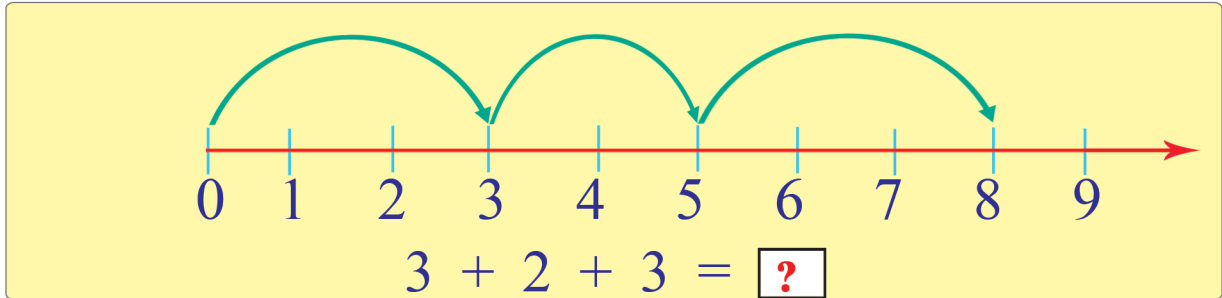
9

+

-

=

Gocha – 14



Gocha – 15



9



$$\boxed{?} + \boxed{?} + \boxed{?} = 9$$

$$\boxed{?} + \boxed{?} + \boxed{?} = 9$$

$$\boxed{?} + \boxed{?} + \boxed{?} = 9$$

Gocha – 14

Fakkiiwwanitti fayyadamuun lakkoofsota sadi xiyya lakkoofsa fi gabatee lakkoofsotaatti gargaaramuun ida'uu.

Gocha – 15

Kubbaalee 9 guuboo keessaa akkaataa fakkeenya kennameetti bakka sadiitti qooduu.

0

1

2

3

4

5

6

7

8

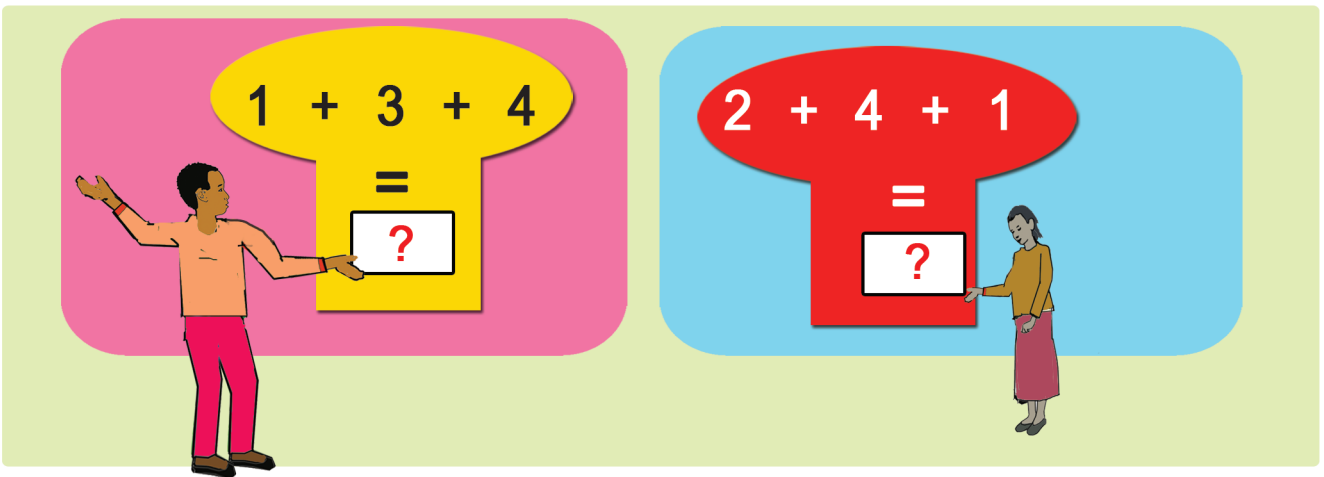
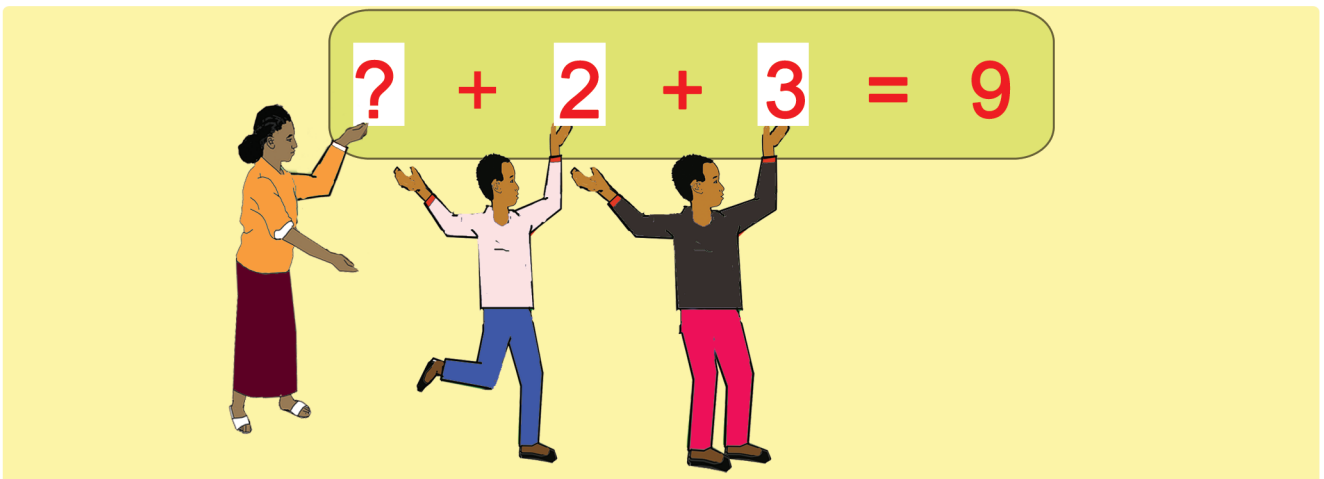
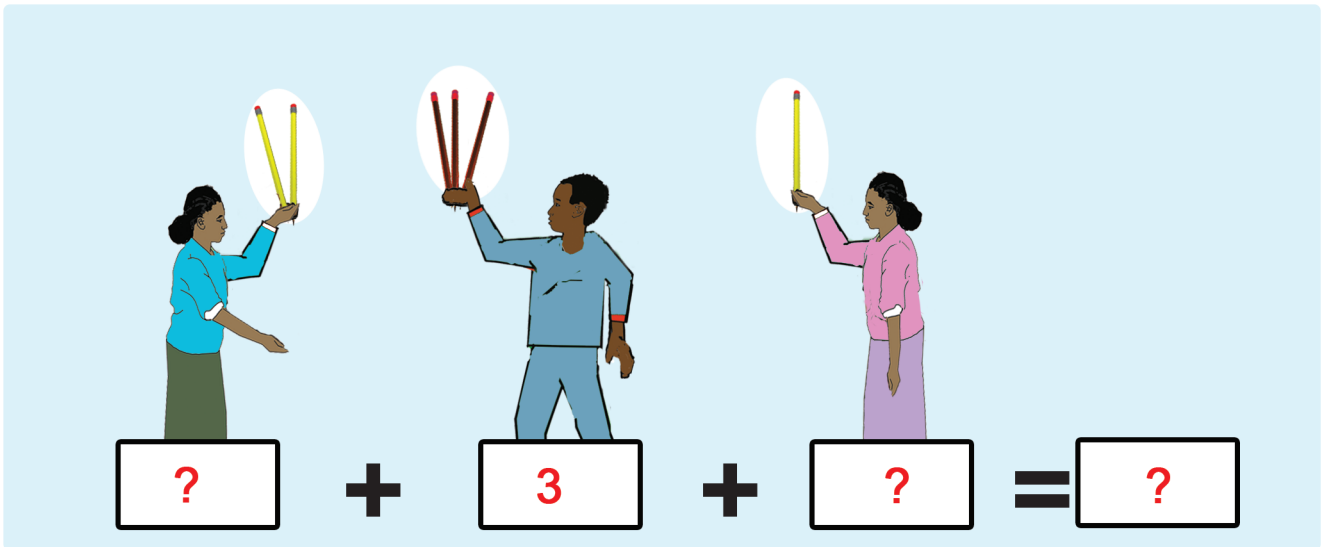
9

+

-

=

Gilgala – 18




Boqonnaa 3

LAKKOOF SOTA HUNDAA
HAMMA 20TTI


0 1 2 3 4 5
6 7 8 9 10
11 12 13 14 15
16 17 18 19 20

3.1 Lakkoofsa Zeeroo


Gocha – 1




3



?





1




?

0







2




4




?




?



?



?



?

Gocha – 1 Simbirroowan mukarra jiran lakkaa'uun baay'ina isaanii bakka
"?" buusuun barreessuu.
Baay'ina isaanii lakkaa'uun barreessuu.

0

1

2

3

4

5

6

7

8

9

10

Gocha – 2

6 - 1 = 5

6 - 2 = ?

6 - 0 = ?



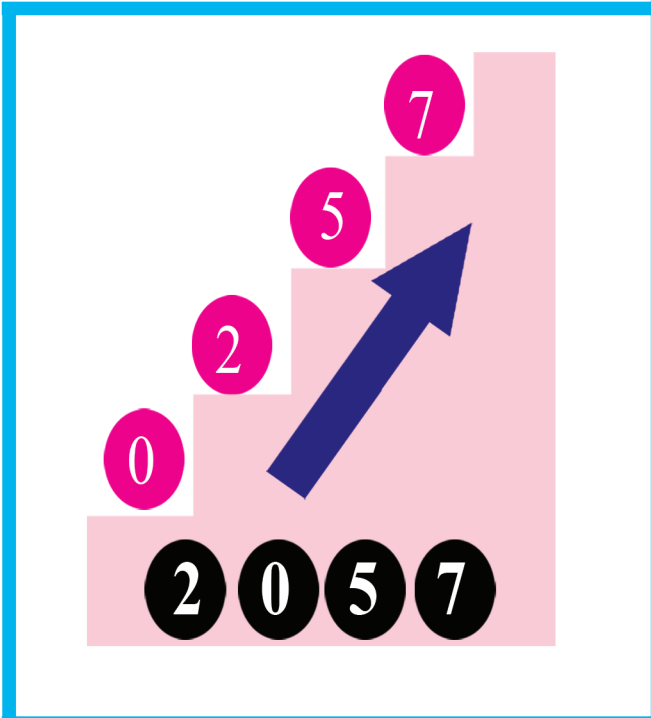
6 - 6 = ?

6 + 1 = ?

6 + 3 = ?

Gocha – 2 Fakkiiwwanitti fayyadamuun qooyyaboota ida'uu fi hir'isuu hojjechuu.

Gilgaala - 1



Gilgaala - 1

Dijiitota xiqqaa irraa gara guddaatti, tartiibaan gadii gara oliitti tarreessuu.

0

1

2

3

4

5

6

7

8

9

10

3.2 Lakkoofsota Hundaa Hamma 20ttii fi Tartiiba isaanii

Gocha – 3

1 + 1 =

2 + 1 =

3 + 1 =

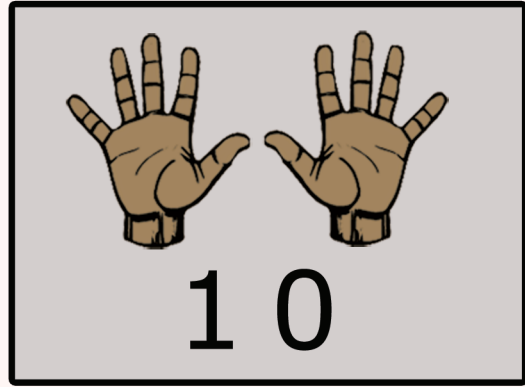
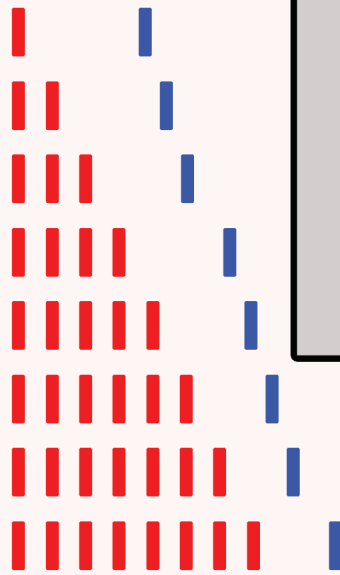
4 + 1 =

5 + 1 =

6 + 1 =


7 + 1 =

8 + 1 =



9 + 1 = 10

Gocha – 4



10 + 1 =

10 + =

10 + =

10 + =

10 + =

Gocha – 3

Lakkoofsota irratti tokko ida'uu fi lakkoofsa 10 barsiisuu

Gocha – 4

Lakkoofsota ida' amuu qaban bakka mallattoo gaaffiitti barreessuu.

11

12

13

14

15

16

17

18





19

20

Gilgaala – 2

1	2	?	4	5
6	7	?	9	?
11	12	?	14	?

Gocha – 5

	$10 + \boxed{?} = \boxed{16}$
	$10 + \boxed{?} = \boxed{17}$
	$10 + \boxed{?} = \boxed{18}$
	$10 + \boxed{?} = \boxed{19}$

 $10 + 10 = \boxed{20}$

Gilgaala– 3

1	2	3	?	?	?	7	?	9	?
11	?	?	14	15	?	?	?	19	?

Gilgaala – 2 Tartiiba kenname irratti hundaa'uun bakka duwaa guutuu.

Gocha – 5 Lakkoofsa himicha dhugoomsu saanduqa keessatti barreessuu.

Gilgaala– 3 Bakka duwaa Irratti lakkoofsa tartiibaan sirrii ta'e guutuu.

0

1

2

3

4

5

6

7

8

9

10

Gilgaala – 4

? 6
 ? 12
 ? 11
 ? 20
 ? 18

Gilgaala – 5

7 ?
 9 ?
 15 ?
 11 ?
 19 ?

Gilgaala – 6

7 ? 9
 11 ? 13
 14 ? 16
 18 ? 20
 10 ? 12

Gilgaala – 7

□ 7 □
 □ 15 □
 □ 19 □
 □ 12 □
 □ 9 □

Gocha – 6

< = >

13 ? 13
 12 ? 18
 11 ? 11

14 ? 6
 18 ? 4
 19 ? 2

19 ? 11
 12 ? 8
 9 ? 12

Gilgaala-4 Dursaa lakkoofsa kennamee barreessuu.

Gilgaala-5 Itti fufaa lakkoofsa kennamee barreessuu.

Gilgaala-6 Lakkoofsa isaan kennaman gidduutti argamu barreessuu.

Gilgaala-7 Dursaa fi itti fufaa lakkoofsa kennamee bakka duwwaa irratti guutuu.

Gocha-6 Mallattoo <, > fi = tti fayyadamuun lakkoofsota waliin madaaluu.

11

12

13

14

15

16

17

18

19

20

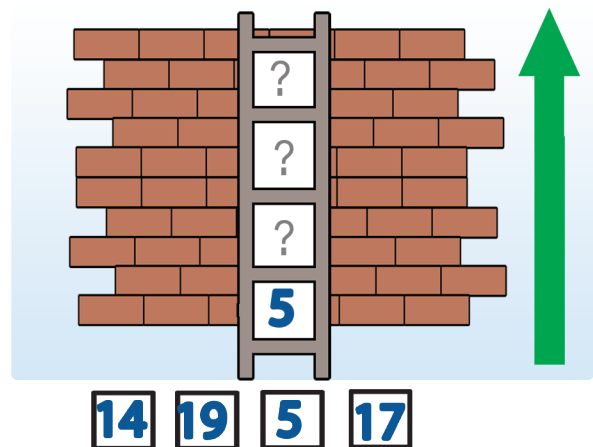
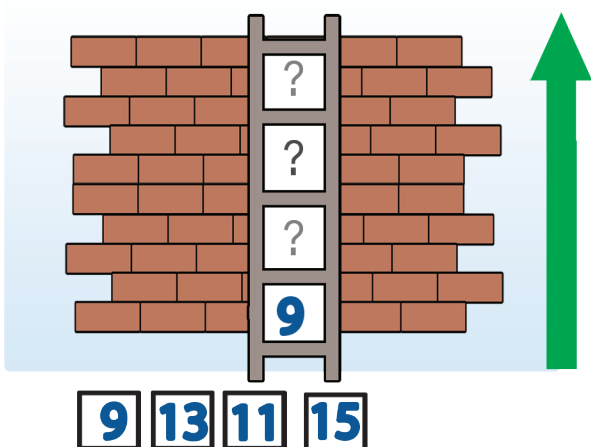
Gilgaala - 8

6	7			10	
13	14				
15					
11					

Gilgaala - 9

1		3		5	
11	12			15	
					17
					20
					13

Gilgaala - 10



Gilgaala-8

Tartiiba kenname hordofuun bakka duwwaa guutuu.

Gilgaala - 9

Gara duubaa fi gara fuulduraatti lakkaa'uun bakka duwwaa guutuu.

Gilgaala - 10

Sadarkaa irratti lakkoofsota kennaman jalaa gara oliitti tartiibaan barreessuu.

0

1

2

3

4

5

6

7

8

9

10

3.3 Sirna Mana Lakkoofsotaa

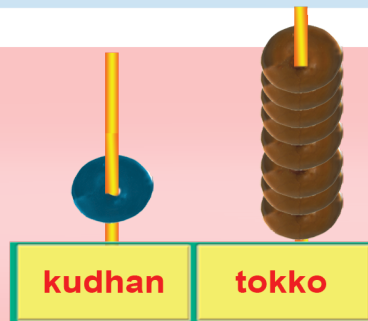
Gohca – 7

$$13 = 10 + 3$$



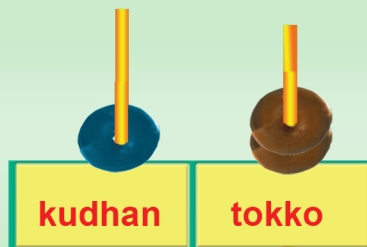
Mana kurnanii	Mana tokkee
1	3

$$18 = 10 + \square$$



Mana kurnanii	Mana tokkee
?	?

$$12 = 10 + \square$$



Mana kurnanii	Mana tokkee
?	?

Gilgaala – 11

	Mana kurnanii	Mana tokkee
16	1	6
11		
17		
19		
20		

Gocha – 7

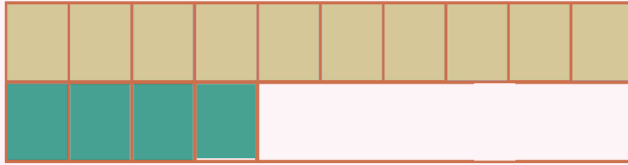
Mana kurnanii fi mana tokkee addaan baasuu.

Gilgaala – 11

Mana kurnanii fi mana tokkee lakkoofsota kennamanii barreessuu.

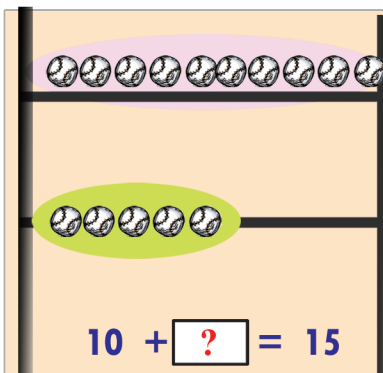
Gocha – 8

Mana kurnanii Mana tokkee



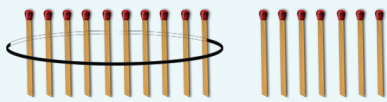
$$14 = 10 + \boxed{?}$$

	Mana kurnanii	Mana tokkee
14	?	?



$$10 + \boxed{?} = 15$$

	Mana kurnanii	Mana tokkee
15	?	?



$$17 = 10 + \boxed{?}$$

	Mana kurnanii	Mana tokkee
17	?	?

Gilgaala – 12

$$11 = 10 + \boxed{1}$$

$$19 = 10 + \boxed{?}$$

$$12 = 10 + \boxed{?}$$

$$15 = 10 + \boxed{?}$$

$$17 = 10 + \boxed{?}$$

$$13 = 10 + \boxed{?}$$

$$16 = 10 + \boxed{?}$$

$$14 = 10 + \boxed{?}$$

$$10 = 10 + \boxed{?}$$

$$20 = 10 + \boxed{?}$$

Gocha – 8

Mana kurnanii fi mana tokkee lakkoofsa kennamee barreessuu.

Gilgaala 12

Lakkoofsa kenname ida'ama 10 fi lakkoofsa kan biraa gochuun barreessuu.

Boqonnaa 4

IDA'UU FI HIR'ISUU
HAMMA 20TTI

$$\begin{array}{r} 12 \\ + 5 \\ \hline 17 \end{array}$$

$$\begin{array}{r} 17 \\ - 5 \\ \hline 12 \end{array}$$

4.1 Lakoofsota Hamma 20tti Ida'uu



Gocha – 1





$$8 + 5 = 13$$



$$12 + 5 = \boxed{?}$$



$$9 + 6 = \boxed{?}$$



$$7 + 3 = \boxed{?}$$

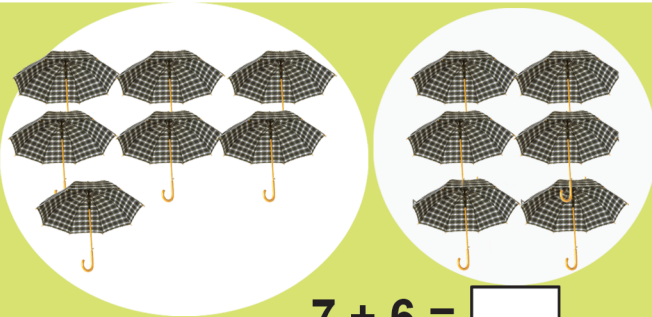
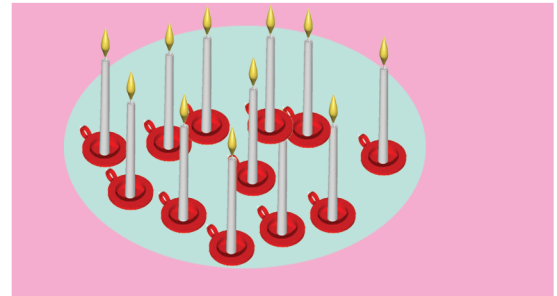
Gocha – 1

Akka fakkeenyaan kennametti bakka duwaa irratti ida'amaisaanii barreessuu.


Gocha – 2



$$4 + 8 = 12$$




$$7 + 6 = \square$$



$$5 + 12 = \square$$



$$8 + 9 = \square$$



Gilgaala– 1

$$3 + 7 = \square$$

$$14 + 2 = \square$$

$$4 + 8 = \square$$

$$8 + 3 = \square$$

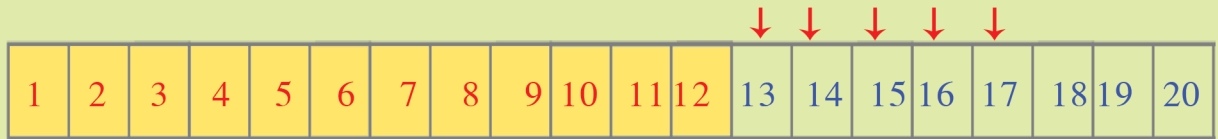
Gocha– 2

Fakkiwwan lakkaa'uun ida'ama isaanii argachuu.

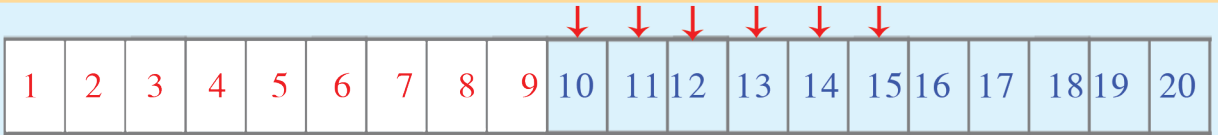
Gilgaala– 1

Ida'ama isaanii bakka duwwaa irratti barreessuu.

Gilgaala -2



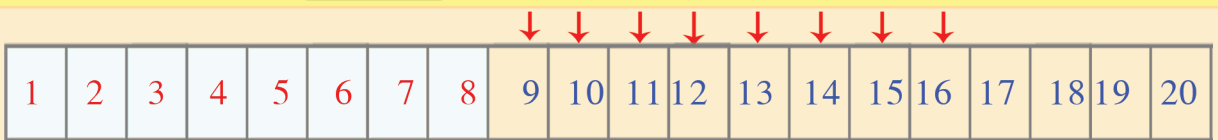
$$12 + 5 = 17$$



$$9 + 6 = \square$$




$$12 + 8 = \square$$



$$8 + 8 = \square$$

Gilgaala -3

$\begin{array}{r} 7 \\ +3 \\ \hline 10 \end{array}$ 	$\begin{array}{r} 5 \\ +5 \\ \hline \end{array}$	$\begin{array}{r} 4 \\ +3 \\ \hline \end{array}$	$\begin{array}{r} 9 \\ +5 \\ \hline \end{array}$
$\begin{array}{r} 8 \\ +5 \\ \hline \end{array}$	$\begin{array}{r} 6 \\ +7 \\ \hline \end{array}$	$\begin{array}{r} 9 \\ +8 \\ \hline \end{array}$	$\begin{array}{r} 4 \\ +7 \\ \hline \end{array}$

Gilgaala-2 Lakkofsa isa guddaa irraa jalqabuun ida'ama isaanii argachuu.
Gilgaala-3 Sararootatti fayyadamuun ida'ama lakkoofsotaa argachuu.

Gilgaala - 4



$$5 = 2 + 3$$

$$5 = 1 + 4$$

$$5 = 3 + \boxed{?}$$

$$5 = 0 + \boxed{?}$$



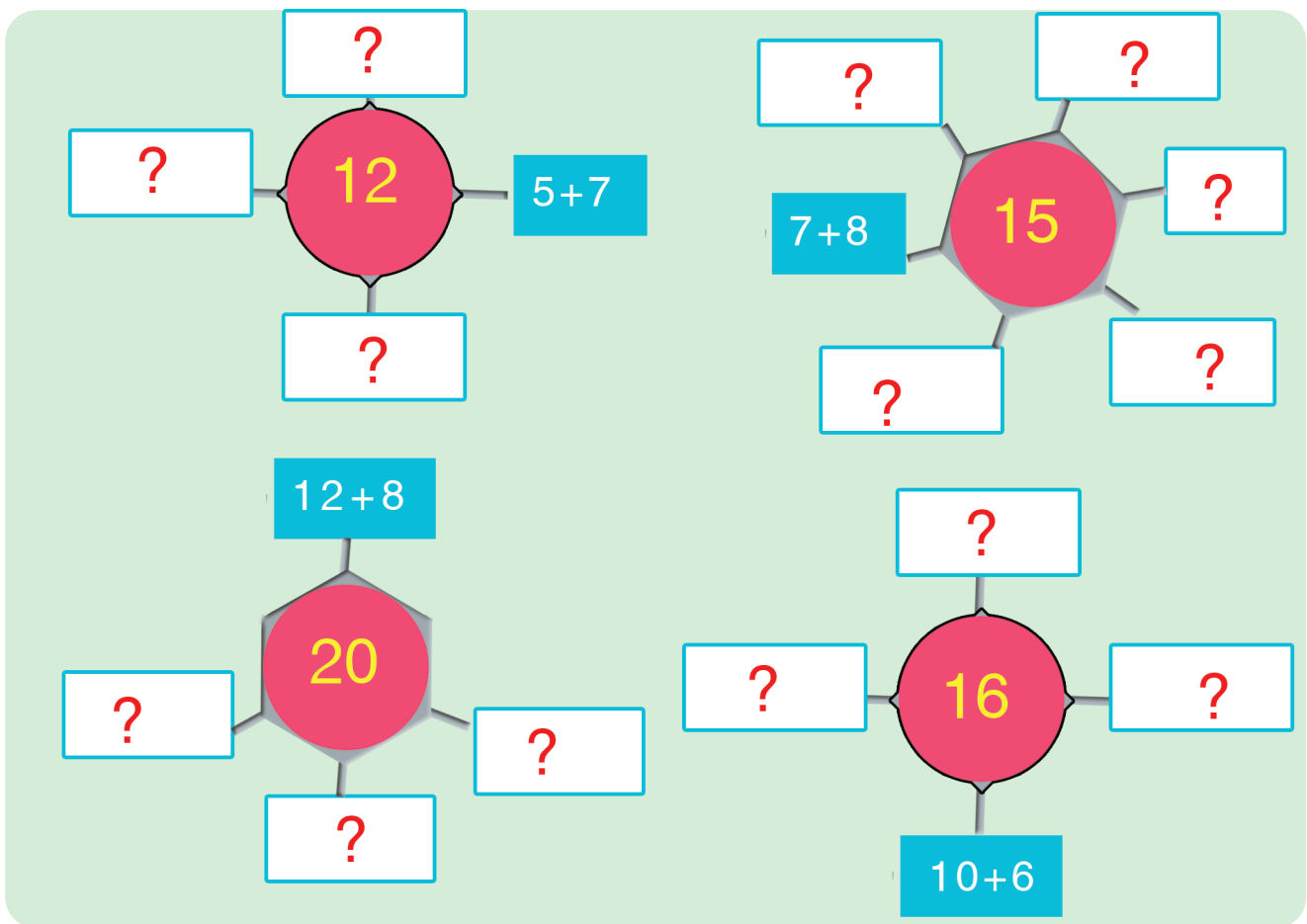
$$9 = 3 + 6$$

$$9 = \boxed{?} + \boxed{?}$$

$$9 = \boxed{?} + \boxed{?}$$

$$9 = \boxed{?} + \boxed{?}$$

Gilgaala - 5



Gilgaala - 4 Lakkoofsota ida'amtotaan diddiriirsuu.

Gilgaala - 5 Fakkeenya kenname irratti hundaa'uun bakka mallattoo gaaffii lakkoofsaan guutuu.

0

1

2

3

4

5

6

7

8

9

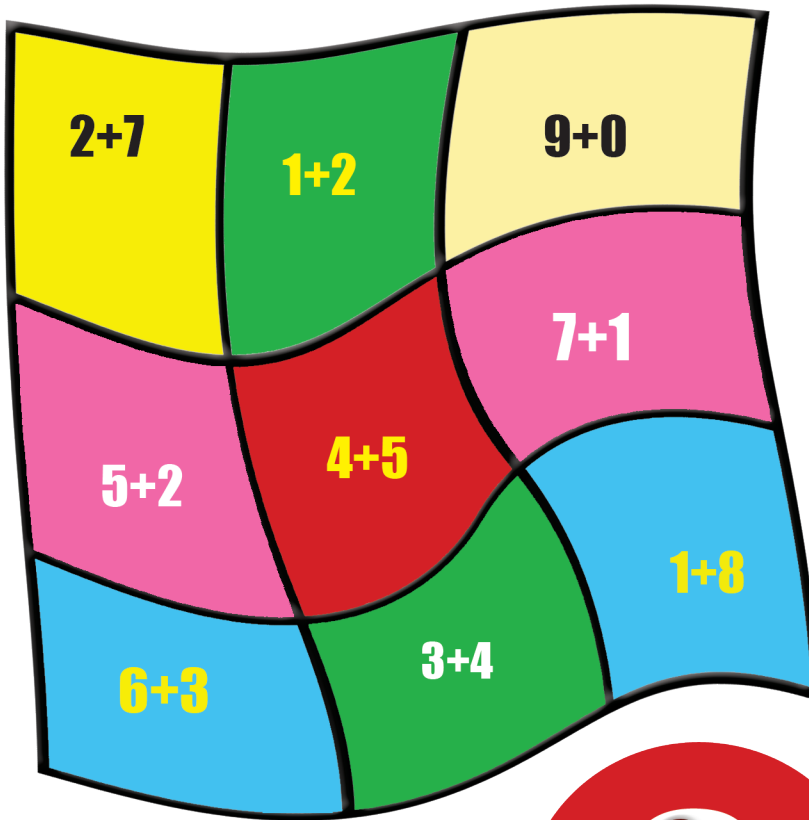
10

+

-

=

Gocha 3



Gilgaala - 6

15

+ 3

—

12

+ 4

—

10

+ 1

—

13

+ 1

—

Gocha - 3

Kan ida'amni isaani 9 ta'e fi hintaane halluu itti dibamenaddaan baafachuu.

Gilgaala - 6

Irraa gadee ida'uun barreessuu.

11

12

13

14

15

16

17

18

19

20

+

-

=

Gilgaala - 7

$$\begin{array}{r} 13 \\ + 4 \\ \hline \end{array}$$

Mana tokkee
3
4
7

Mana kurnanii	Mana tokkee
1	3
	4
1	7

Mana kurnanii	Mana tokkee
1	5
+	3

Mana kurnanii	Mana tokkee
1	2
+	7

Mana kurnanii	Mana tokkee
1	5
+	3

Gilgaala - 8

$$\begin{array}{r} 12 \\ + 7 \\ \hline \square \end{array}$$

$$\begin{array}{r} 13 \\ + 6 \\ \hline \square \end{array}$$

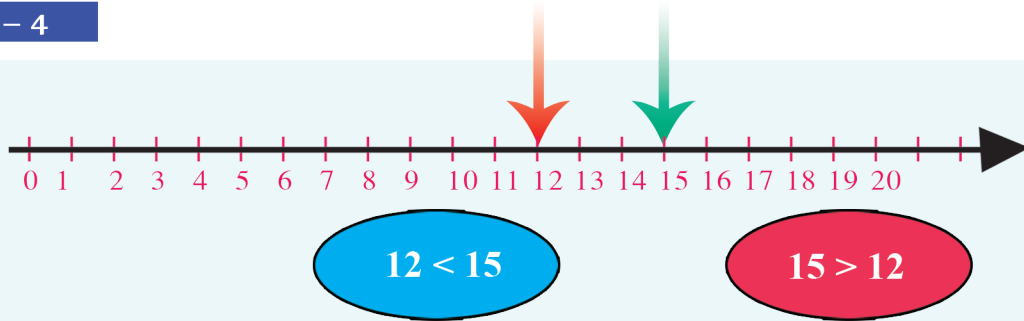
$$\begin{array}{r} 11 \\ + 8 \\ \hline \square \end{array}$$

$$\begin{array}{r} 10 \\ + 10 \\ \hline \square \end{array}$$

Gilgaala - 7 Mana tokkee fi mana kurnanii lakkoofsotaa addaan baasuun irraa gadee ida'uu.

Gilgaala - 8 Irraa-gadee ida'uu

Gocha – 4



$15 > 12$

$10+5 > 10+2$

$5 > 2$

$13 < 15$

$10+3 < 10+5$

$3 < 5$



Gilgala – 9

$15 \square ? 12$

$16 \square ? 11$

$9 \square ? 11$

$12 \square ? 8$

Gocha – 4 Lakkoofsota yoo waliin madaallu, inni xiqqaan isaa guddaa irraa gara kamitti akka argamu dubbachuu.

Gilgala– 9 Mallattoolee $<$, $>$ fi $=$ saanduqa duwwaa keessatti barreessuun himoota dhugoomsuu.

4.2 Lakkoofsota hamma 20tti jiran hir'isuu

Gocha – 5

1

$12 - 5 = 7$

2

$15 - 3 = ?$

3

$11 - 5 = ?$

Gilgaala – 10

Fakkeenya $18 - 5 = 13$

$12 - 3 = ?$

$18 - 11 = ?$

$19 - 5 = ?$

$17 - 5 = ?$

$20 - 10 = ?$

$17 - 8 = ?$

Gocha – 5 Fakkiwwaniin hir'isuu.

Gilgaala – 10 wantoota naannootti argamanitti gargaaramuun hir'isuu.



Gilgaala – 11

14

$- 2$

16

$- 4$

18

$- 7$

18

$- 5$

18

$- 12$

17

$- 13$

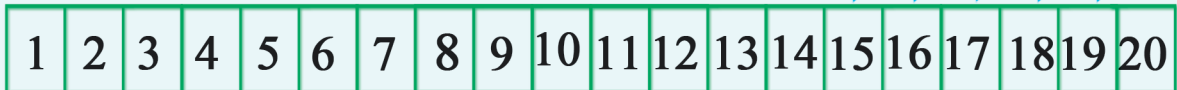
18

$- 17$

20

$- 10$

Gilgaala – 12



$20 - 5 = 15$

$19 - 6 = \boxed{?}$

$17 - 9 = \boxed{?}$

$15 - 12 = \boxed{?}$

$18 - 7 = \boxed{?}$

$17 - 8 = \boxed{?}$

$15 - 10 = \boxed{?}$

$18 - 14 = \boxed{?}$

$17 - 7 = \boxed{?}$

$15 - 8 = \boxed{?}$

$18 - 12 = \boxed{?}$

$17 - 6 = \boxed{?}$

$15 - 6 = \boxed{?}$

$18 - 11 = \boxed{?}$

$17 - 5 = \boxed{?}$

$15 - 4 = \boxed{?}$

Gilgaala – 11

Iraa gadee hir'isuu.

Gilgaala – 12

Akka fakkeenya kennameetti saanduqa duwwaa guutuu.

11

12

13

14

15

16

17

18

19

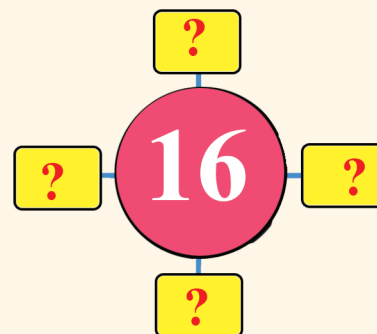
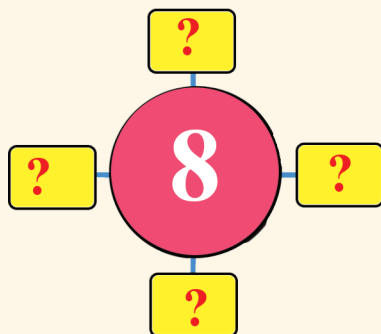
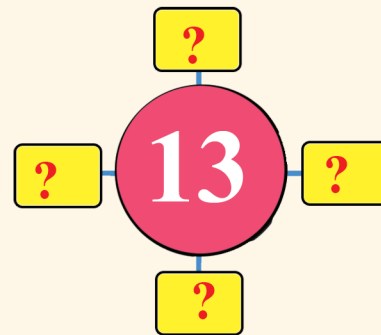
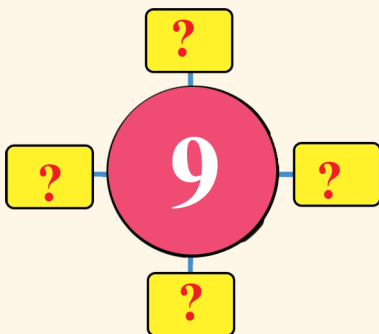
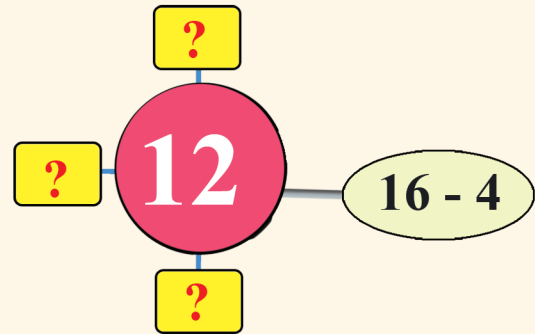
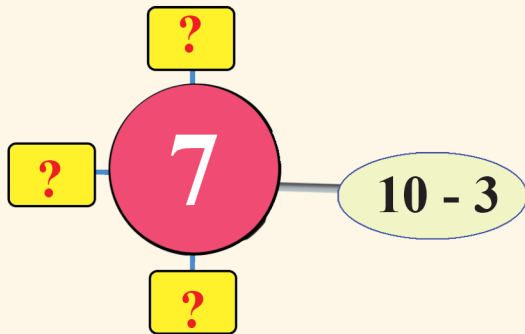
20

+

-

=

Gocha – 6



Gocha – 6 Akka fakkeenya kennameetti saanduqa duwwaa guutuu.

Gilgaala – 13

5	12 - 7	8 - 3	9 - 4
7			
13			16 - 3
8	10 - 2		
11			16 - 5

Gilgaala – 14

10	14
10 - 0	14 - 0
11 - <input type="text"/>	16 - <input type="text"/>
14 - <input type="text"/>	17 - <input type="text"/>
<input type="text"/> - 3	<input type="text"/> - 3
20 - <input type="text"/>	<input type="text"/> - 4


Gilgaala – 13 Lakkoofsota gara bitaa jiran, caalmaa lakkoofsota lamaa gochuun bakka duwwaa guutuu.

Gilgaala – 14 Akka fakkeenya kennametti lakkoofsa caalmaan isaa 10 fi 14 ta'e saanduqa duwwaa keessatti barreessuu.

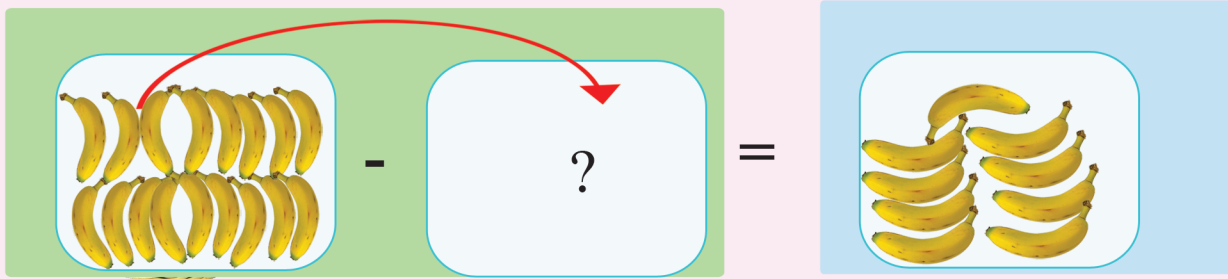
4.3 Piroobileemota Ida'uu fi Hir'isuu

Gilgaala – 15

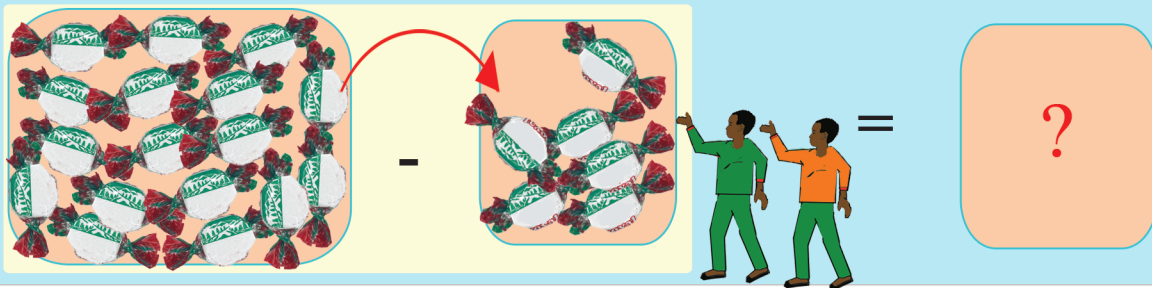
Boonaan buuphaa 7 qaba. Yoo meeqa bite 15 ta'aaf



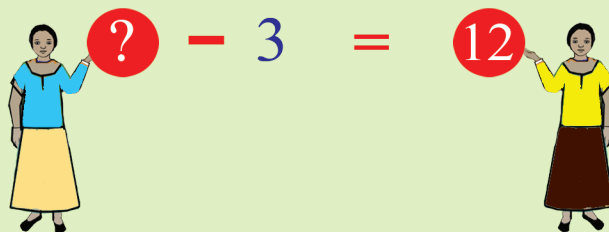
Guuboo keessa muuzii 16tu jira. Yoo meeqa irraa hir'ate 9 hafa



Karameellaa 17 qaba. 6 hiriyyoota koof yoon kennu meeqatu naaf hafa



Lakkoofsa tokko yaade. 3 yoo irraa hir'atu 12tu hafa. Lakkoofsi ani yaade meeqaa



Gilgaala – 16

Gammachuu

Caaltuu

Gilgaala – 16

Piroobileemota jechaa uumuu fi hima walqixaa uumuu.




Boqonnaa 5

YUUNIITOTA
AADAATIIN SAFARUU



5.1 Safara Dheerinaa


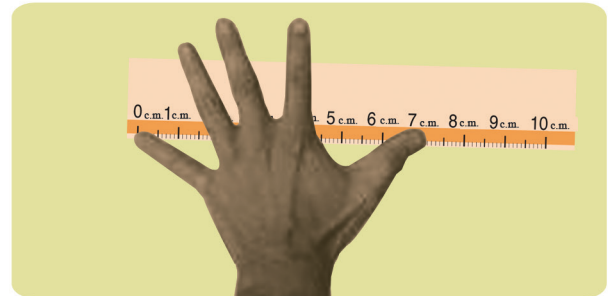
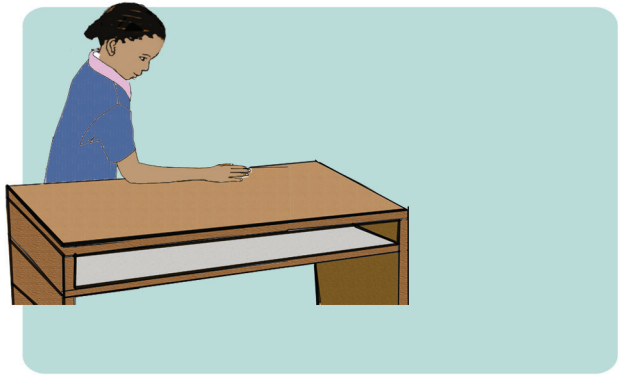

Gohca – 1



Gocha – 1 Fakkiiwwan ilaaluun gabaabaa fi dheeraa jechuun addaan baasuu.



Gocha – 2




Gocha – 2

Wantootaa naannoo keenyatti argaman tarkaanfiin, taakkuun, dhundhumaan, faanaa fi funyoon safaruu shaakaluu.




5.2 Qabee Dhangala'aa Safaruu

Gocha – 3



Gocha – 4



Gocha – 3



Jechoota guutuu, hir'uu fi duwwaatti dhimma ba'uu.

Gocha – 4


Kubbaayyaa ykn xaasaatiin safaruun baaldiin ykn jarikaanni kubbaayyaa ykn joogii meeqa akka ta'u safaruu. Qabee baaldii fi jarikaanaa waliin madaaluu.



Gocha – 5



Gocha – 6




Gocha – 5 Meeshaalee wal cinaa jiran keessaa inni kam dhangala'aa irraa caalaa akka qabatu himuu.

Gocha – 6 Ujummoo walfakkaatan lamatti fayyadamuun kamtu dafee guuta?



5.3 Hanga safaruu

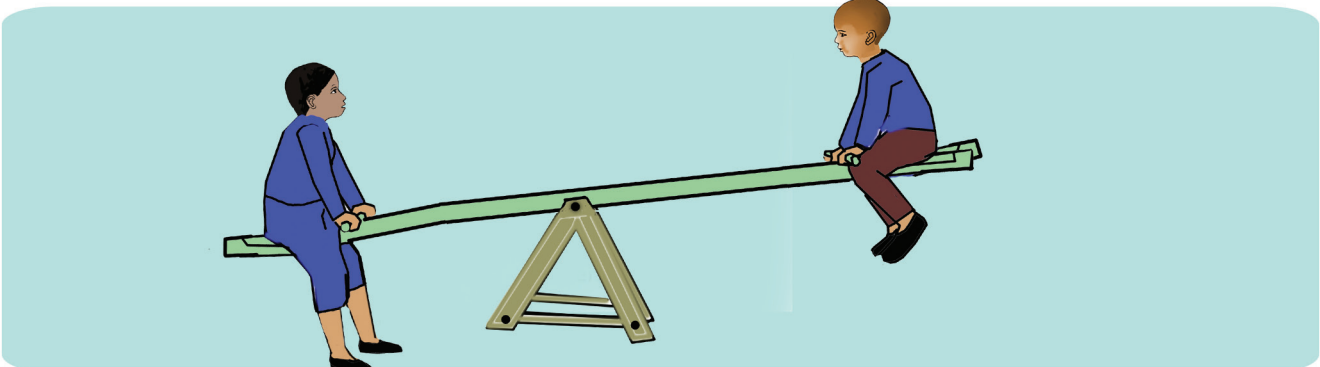

Gocha – 7



Gocha – 7 Hanga meeshaalee wal cinaa jirani waliin madaaluu.



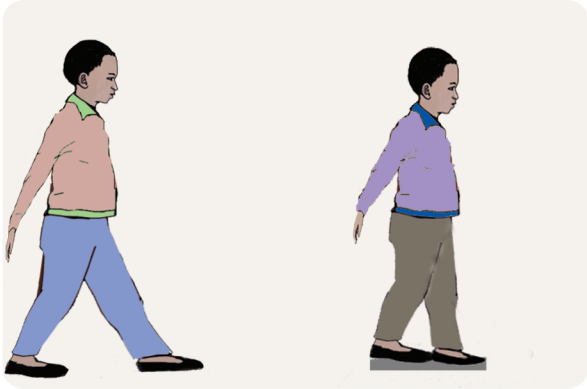


Gocha – 8





Gilgala – 1




Gilgala – 1 Yuunitii adda addaa irratti mari'achuu.

- Fakkii isa dheeraa addaan baasuu.
- Baaldiin joogii meeqa qabata?
- kamtu irra ulfaata?


Boqonnaa 6

SEENSA FIRAAKSHINOOTAA

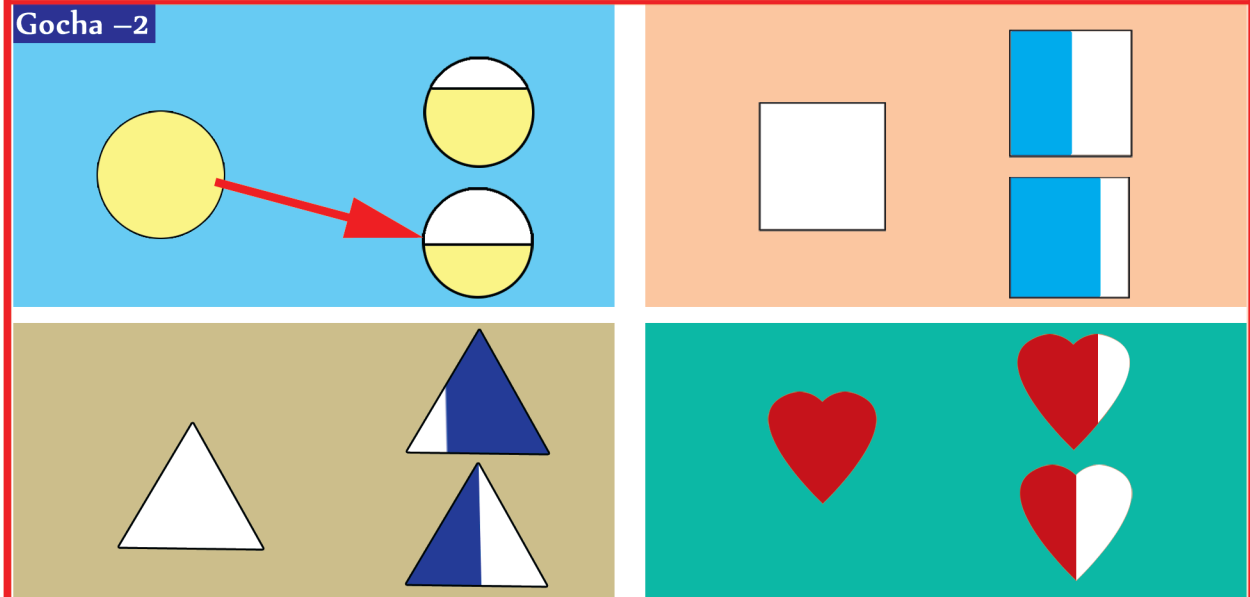


6.1 Walakkaawwan

Gocha – 1



Gocha – 2



Gohca – 1 Daabboo tokko ijoollee lamaaf hiruudhaaf isa kamtu lamaanuu gammachiisa?

Gohca – 2 Walakkaa fakkii gara bitaa jiruu xiyyaan agarsiisuu.

1



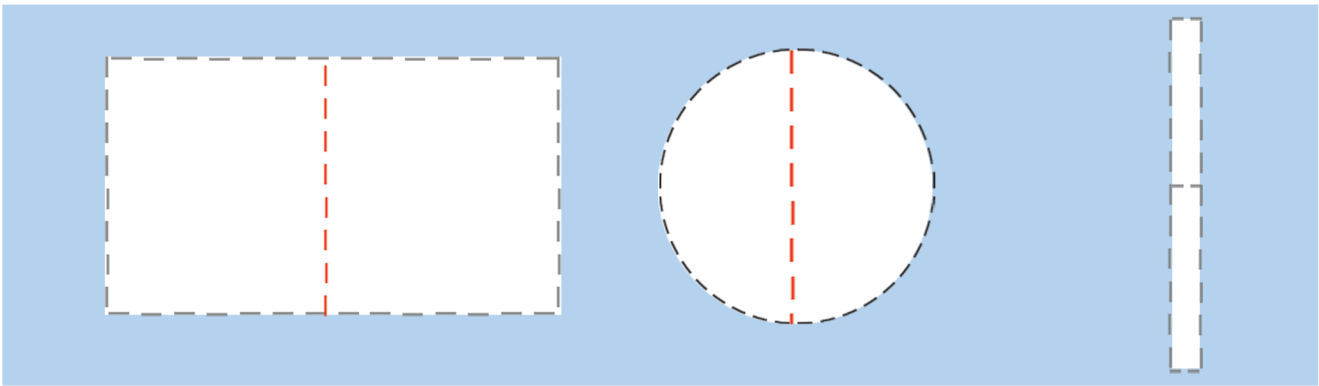
$\frac{1}{2}$





$\frac{1}{4}$



Gilgaala – 1



Gocha – 3



Gilgaala – 1 Walakkaa fakkii kennamee fakkeessuun halluu dibuun $\frac{1}{2}$ jechuun barreessuu.

Gocha – 3 Wantoota naannootti argaman kanneen akka burtukaanaa fi baalaa walakkaa isaanii mul'isuu.

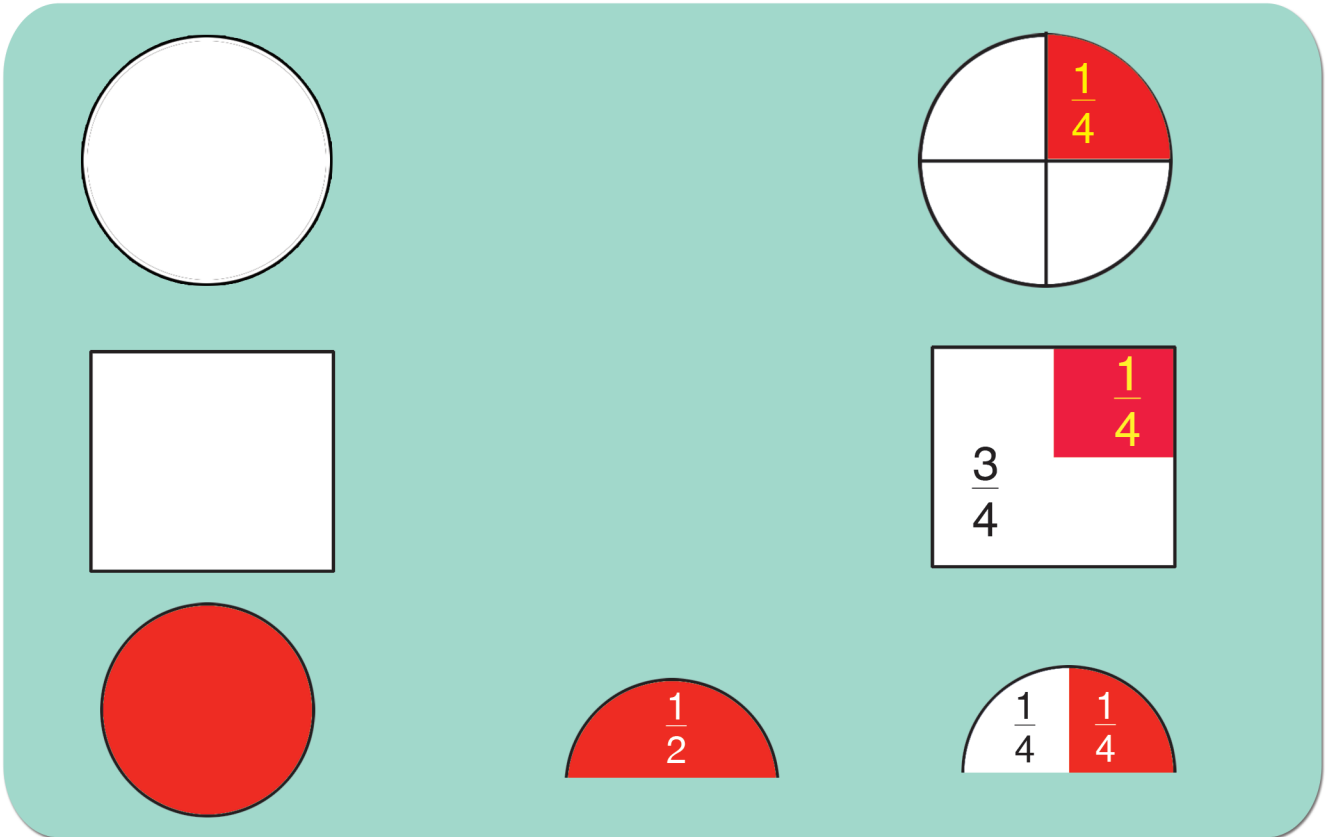


1

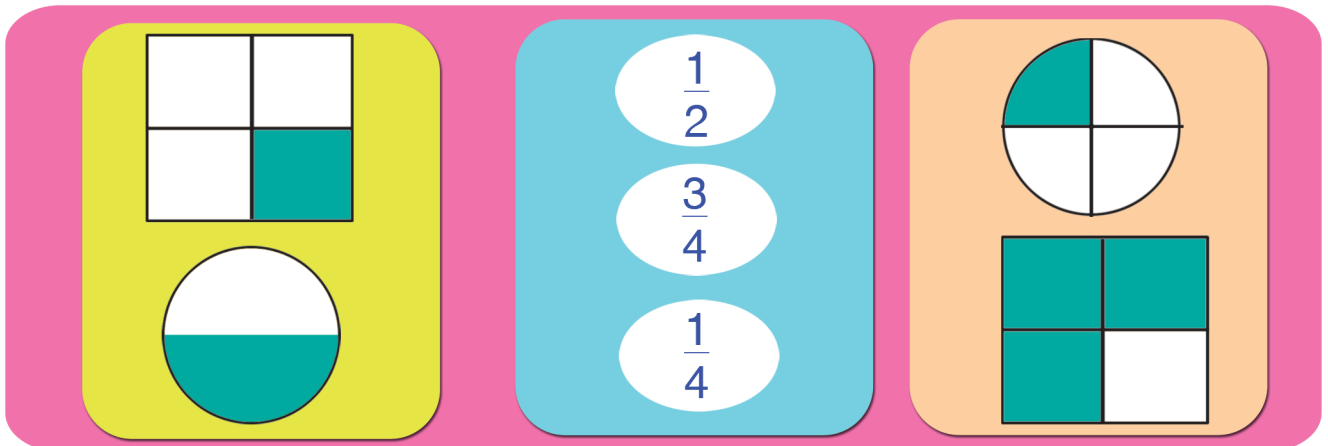
 $\frac{1}{2}$  $\frac{1}{4}$

6.2 Kurmaanota

Gocha – 4



Gilgaala– 2



Gocha – 4

Wantootaa kan akka rogarfee, geengoo fakkaatan bakka afuritti qooduun kurmaana ($\frac{1}{4}$) jedhani waamuu.

Gilgaala – 2

Kan halluu dibame $\frac{1}{2}$, $\frac{1}{4}$ ykn $\frac{3}{4}$ wajjin firoomsuu (xiyyaan haa fayyadamnu)



Gilgaala – 3

$\frac{1}{2}$

$\frac{1}{4}$

$\frac{3}{4}$


Gilgaala– 4

$\frac{1}{2}$ $\frac{3}{4}$
 $\frac{1}{4}$ $\frac{1}{4}$

Gilgaala– 3 Danaa maqaa firaakshinii lakkoofsaan kenname ibsu filahcuu
Gilgaala – 4 Halluu dibuun firaakshinii kenname mul'isuu.

Boqonnaa 7

LAKKOOF SOTA HUNDA
HAMMA 20 TTI LAMAAN
BAAY'ISUU FI LAMA AF HIRUU



7.1 Lakkoofsota Hundaa hamma 20tti jiran Lamaan Baay'isuu

Gocha – 1



3

+



3

=



6


3

×

2


=

6



2

+



2

=



4

?

×

?

=

4

'×' kun mallattoo baay'isuu ti.

Gocha – 1

Garee barattoota shamarran sadii qabu lama ijaaruun daree fuulduratti baasuun $2n$ baay'isuu barsiisuu.

Gocha – 2 Hojii garee

4 + 4 = 8

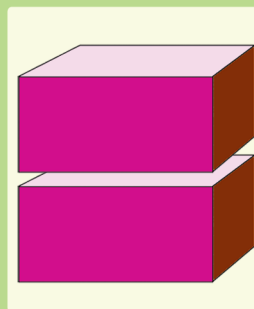
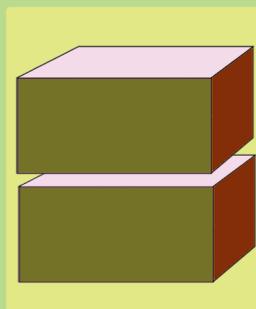
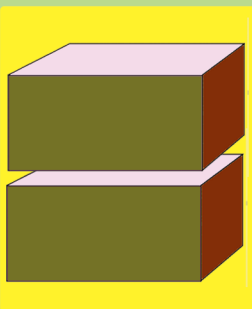
? X 2 = 8

5 + 5 = 10

? X 2 = ?

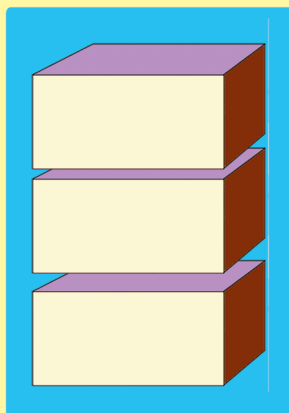
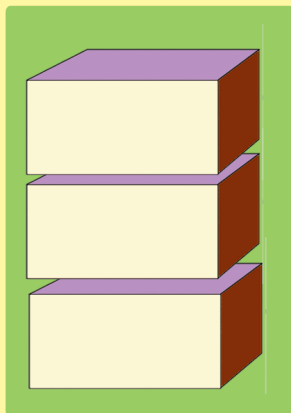
Gocha – 2 Lakkoofsa meeqa 2n yoo baay’ifnu 8 akka argannu xiinxaluu. Hariiroo $5 + 5 = 10$ fi $5 \times 2 = 10$ hubachuu.

Gilgala - 1





$$2 + 2 + 2 = 6$$

$$2 \times \boxed{?} = 6$$



$$3 + 3 = 6$$

$$\boxed{?} \times \boxed{?} = 6$$



$$\boxed{?} \times \boxed{?} = \boxed{?}$$

Gilgala - 1 Danaalee kennaman lakkaa'uun bakka duwaa irratti baay'ina isaanii guutuu.

Gocha – 3



Cirracha 1 si'a 2 =

$$1 + 1 = \text{$$

$$1 \times 2 = \text{$$



Cirrachoota 3 si'a 2 =

$$3 + 3 = \text{$$

$$3 \times 2 = \text{$$



cirrachoota 2 si'a 2 =

$$2 + 2 = \text{$$

$$2 \times 2 = \text{$$



cirrachoota 5 si'a 2 =

$$\text{} + \text{} = \text{$$

$$\text{} \times \text{} = \text{$$

$$1 \times 2 = \text{$$

$$2 \times 2 = \text{$$

$$5 \times 2 = \text{$$

Gocha – 3 Bakka duwaa lakkoofsa sirrii ta'een guutuu.



Gilgaala 2

	baay'isaa	baay'ifamaa	baay'ataa
$8 + 8 =$	8	X	2 = 16
$9 + 9 =$	<input <="" style="width: 30px; height: 20px;" td="" type="text" value="?"/> <td style="text-align: center;">X</td> <td style="text-align: center;"><input <="" style="width: 30px; height: 20px;" td="" type="text" value="?"/> </td>	X	<input <="" style="width: 30px; height: 20px;" td="" type="text" value="?"/>
$10 + 10 =$	<input <="" style="width: 30px; height: 20px;" td="" type="text" value="?"/> <td style="text-align: center;">X</td> <td style="text-align: center;"><input <="" style="width: 30px; height: 20px;" td="" type="text" value="?"/> </td>	X	<input <="" style="width: 30px; height: 20px;" td="" type="text" value="?"/>
$6 + 6 =$	<input <="" style="width: 30px; height: 20px;" td="" type="text" value="?"/> <td style="text-align: center;">X</td> <td style="text-align: center;"><input <="" style="width: 30px; height: 20px;" td="" type="text" value="?"/> </td>	X	<input <="" style="width: 30px; height: 20px;" td="" type="text" value="?"/>

Gilgaala – 3



$$\boxed{?} + \boxed{?} = \boxed{?}$$

$$\boxed{?} \times \boxed{?} = \boxed{?}$$

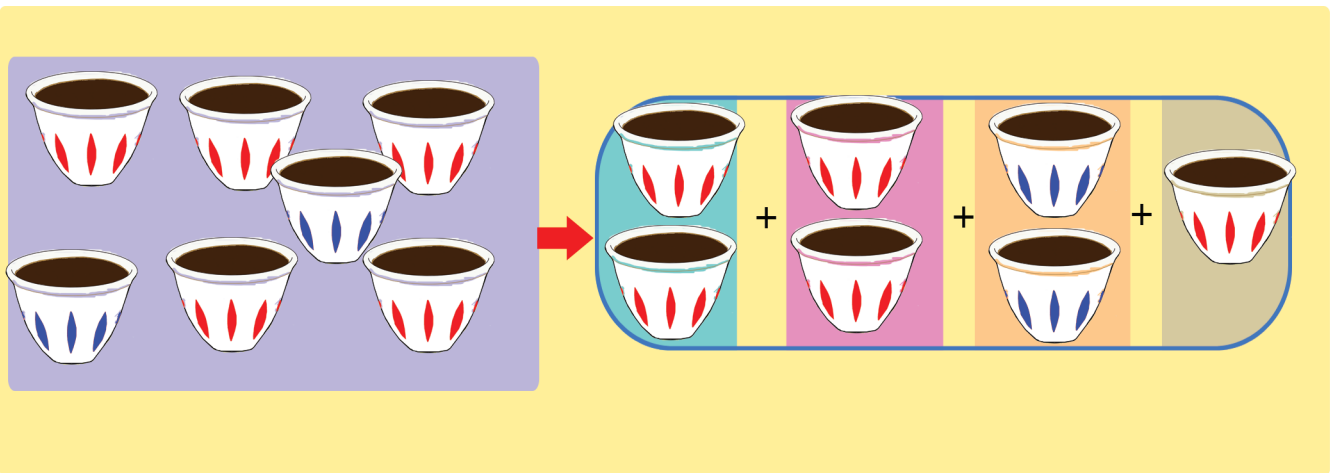
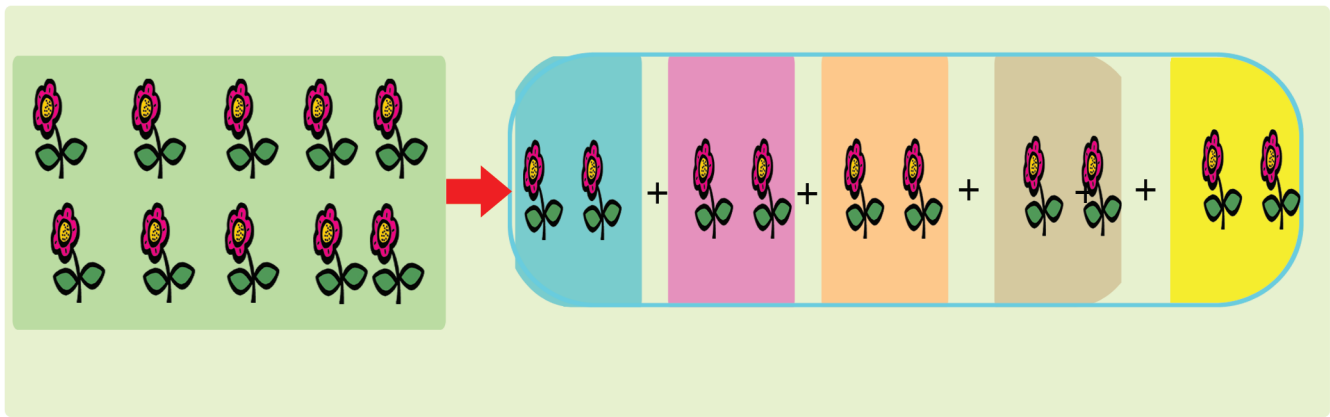
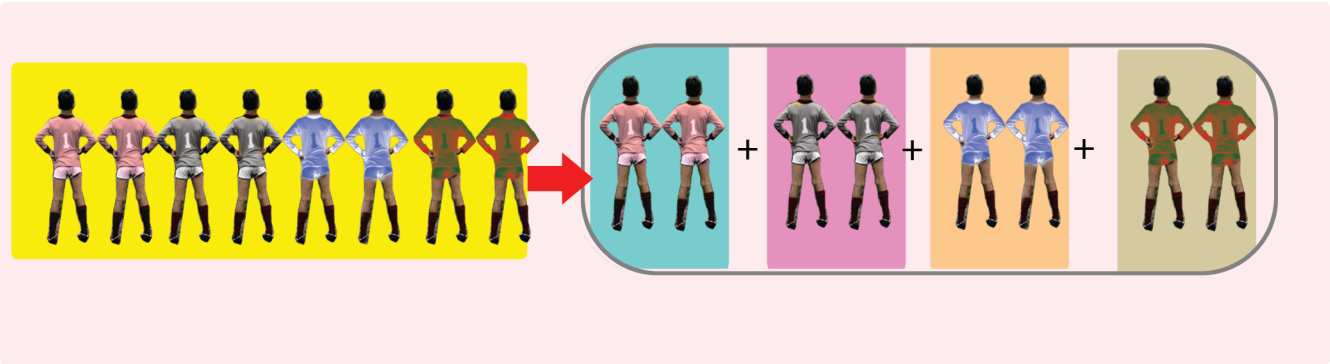
Gilgaala– 2

Fakkeenya kenname irratti hundaa'uun ida'uu gara baay'isuutti jijjiiruun baay'isaa, baay'ifamaa fi baay'ataa bakka duwwaa irratti guutuu.

Gilgaala– 3

Fakkiwwan garee garee isaaniitti lakkaa'uun bakka duwwaa guutuu.





Gocha – 4 Hojii garee



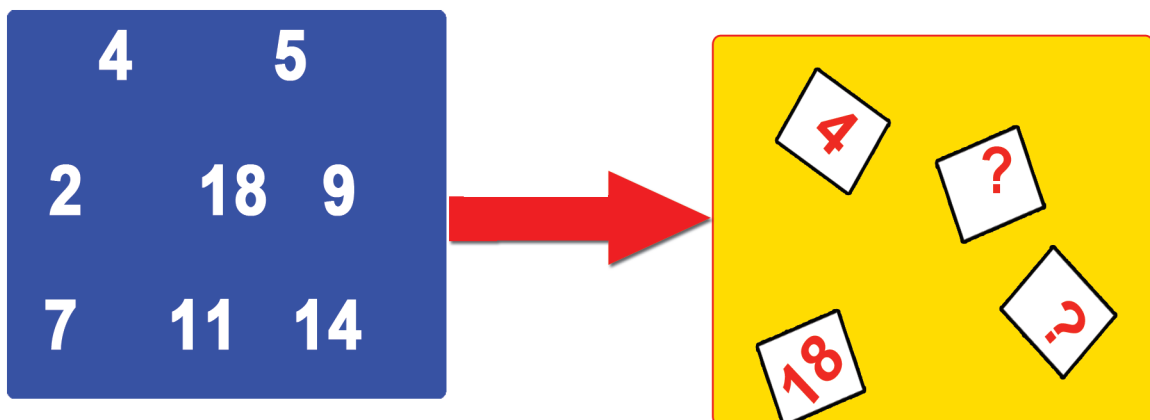
Gocha – 4 Fakkiiwan kennaman lama lamaan qodamuu fi dhiisuu isaanii xiinxaluu.



Gocha – 5 Hojii garee

	✓
	X
	?
	?

Gilgaala – 4



Gocha – 5 Danaalee kennaman lakkaa'uun lama lamaan (cimdiin) qoodamuu kan danda'an yoo ta'e mallattoo (✓) kana, yoo hin taane mallattoo (x) kaa'uun addaan baasuu.

Gilgaala – 4 Lakkoofsota gara bitaa jiran keessaa kan lama lamaan qoqqoodamuu danda'ani saanduqaa gara mirgaa jiru irratti barreessuu.

11

12

13

14

15

16

17


18

19

20


X ÷

Gocha – 6




$$3 \times 2 = 6$$

6



$$2 \times 3 = 6$$

6



$$\boxed{} \times \boxed{} = \boxed{} \times \boxed{}$$

Gocha – 6

Danaalee kennaman lakkaa'uun hima baay'isuu lakkoofsota dhugoomsaniin bakka duwwaa guutuu.

0

1

2

3

4

5

6

7

8

9

10

X

÷

Gilgaala – 5

$?\times ? = ?$ $?\times ? = ?$

$?\times ? = ?$ $?\times ? = ?$

$$2 \times 3 = ? \times 2$$

$$4 \times 2 = ? \times ?$$

Gilgaala – 5

Bakka duwwaa lakkoofsa sirrii ta'een guutuu.

11

12

13

14

15

16

17

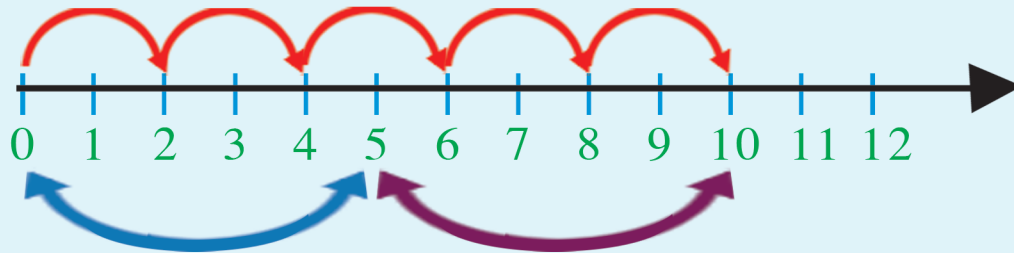
18

19

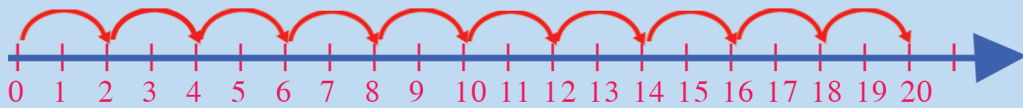
20

X ÷

Gilgaala – 6



$$2 \times 5 = 5 \times 2$$



$$2 \times 1 = 2$$

$$2 \times 6 = 12$$

$$2 \times 2 = 4$$

$$2 \times 7 = 14$$

$$2 \times 3 = 6$$

$$2 \times 8 = 16$$

$$2 \times 4 = 8$$

$$2 \times 9 = 18$$

$$2 \times 5 = 10$$

$$2 \times 10 = 20$$

$$8 \times 2 = \boxed{?}$$

$$2 \times 10 = \boxed{?}$$

$$2 \times 8 = \boxed{?}$$


$$10 \times 2 = \boxed{?}$$

Gilgaala – 6

Firii hima baay'isuu barattoonni sagalee ol kaasanii akka dubbisan gochuu.


-Bakka duwwaa lakkoofsa sirrii ta'een guutuu.

Gilgaala – 7



?


X



?

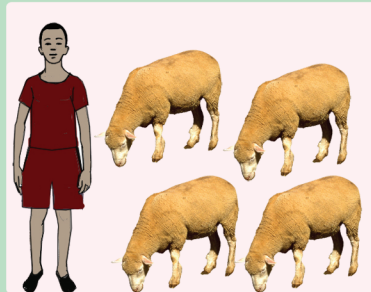
=

?



?

X



?

=

?



?

X



?

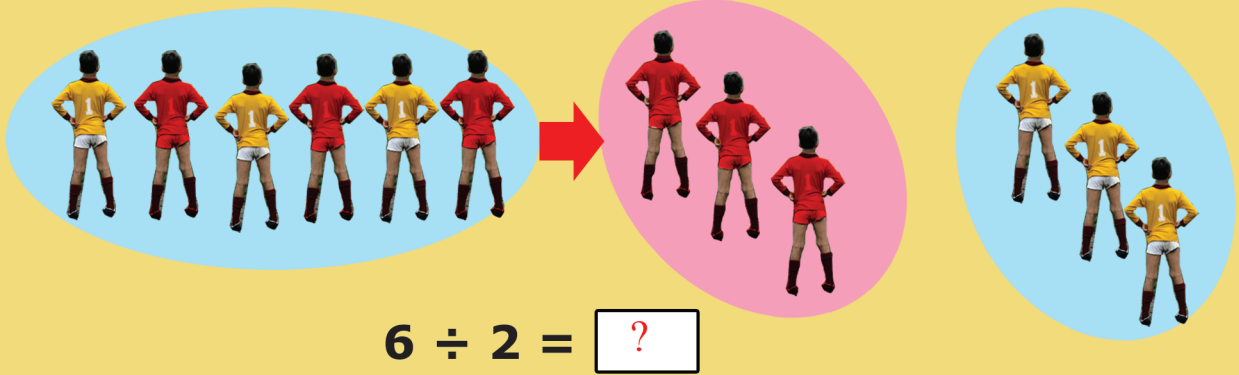
=

?

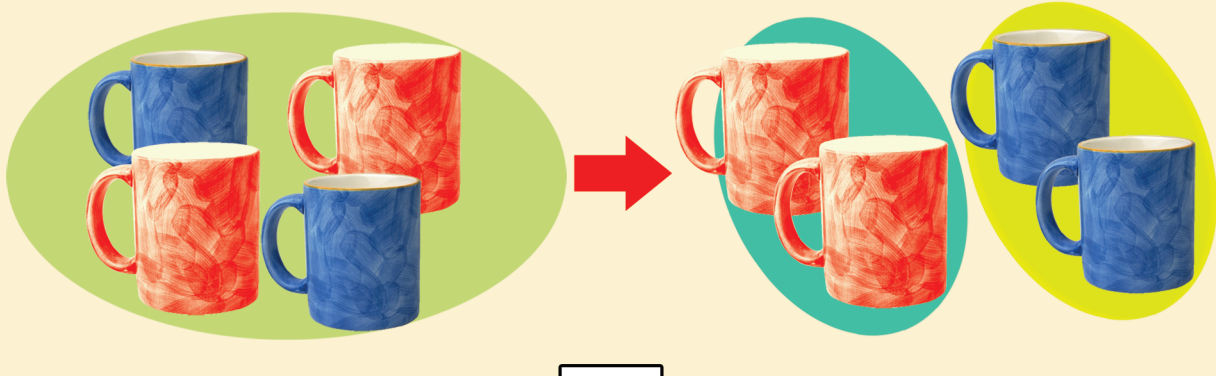
Gilgaala – 7 Piroobileemota jechaaf furmaata kennuu.

7.2 Lakkoofsota guutuu hamma 20tti jiran lamaaf hiruu

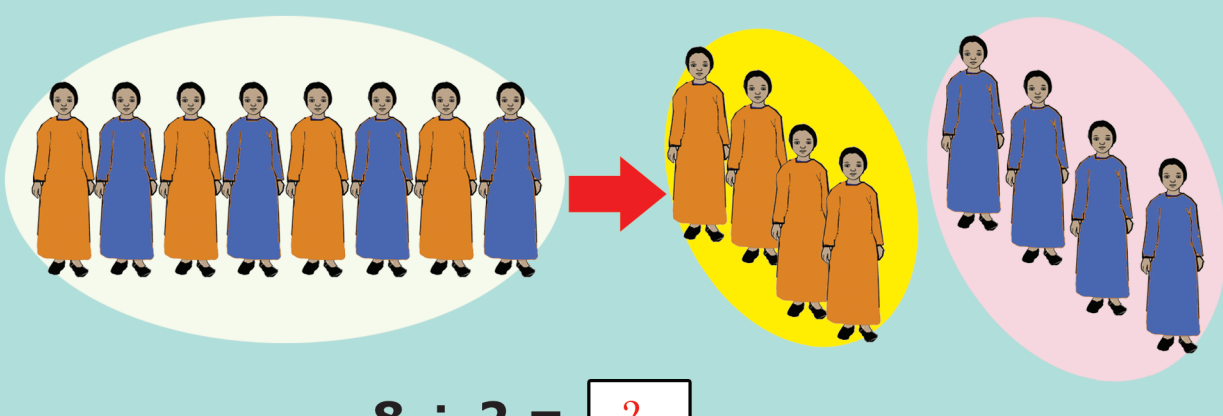
Gocha – 7



$6 \div 2 = \boxed{?}$



$4 \div 2 = \boxed{?}$




$8 \div 2 = \boxed{?}$

Gocha – 7 Bakka duwwaa guutuu.





Gocha – 8






$$14 \div 2 = ?$$

Qoodamaa Qoodaa ga'ee



$$? \div ? = ?$$



$$? \div ? = ?$$

$$? \times ? = ?$$

Gocha – 8

Danaalee lakkaa'uun lakkoofsa hima kenname dhugoomsu saanduqa keessatti guutuu.

Gilgaala – 8

$$10 \div 2 = \boxed{?}$$

$$18 \div 2 = \boxed{?}$$

$$20 \div 2 = \boxed{?}$$

$$14 \div 2 = \boxed{?}$$

$$12 \div 2 = \boxed{?}$$

$$8 \div 2 = \boxed{?}$$

Lamaaf hiruu, lamaan baay'isuun ibsuu

$$12 \div 2 = 6$$

$$6 \times 2 = 12$$



$$14 \div 2 = \boxed{?}$$

$$7 \times 2 = \boxed{?}$$



$$16 \div 2 = \boxed{?}$$

$$\boxed{?} \times \boxed{?} = \boxed{?}$$



$$8 \div 2 = \boxed{?}$$

$$2 \times 4 = \boxed{?}$$



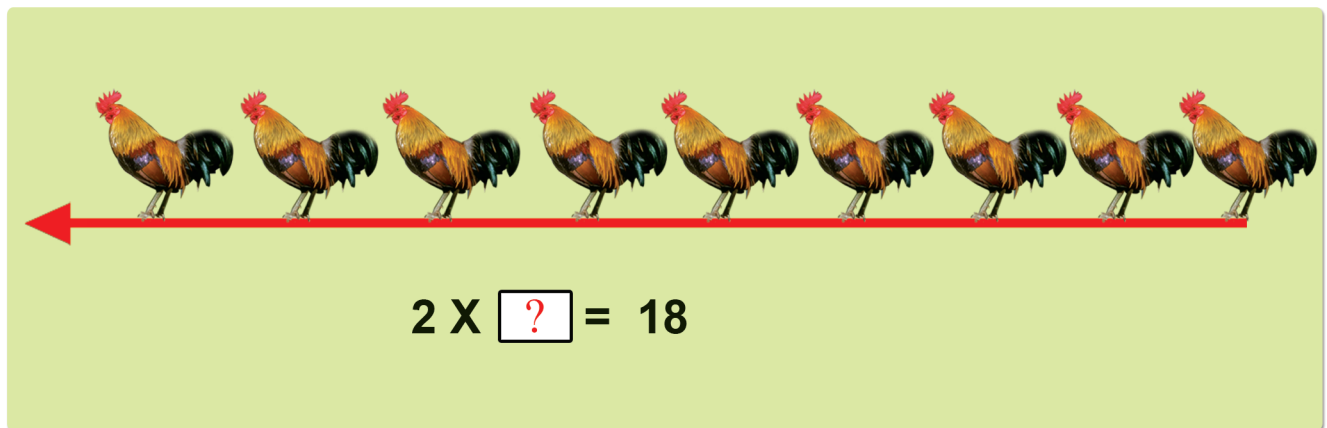
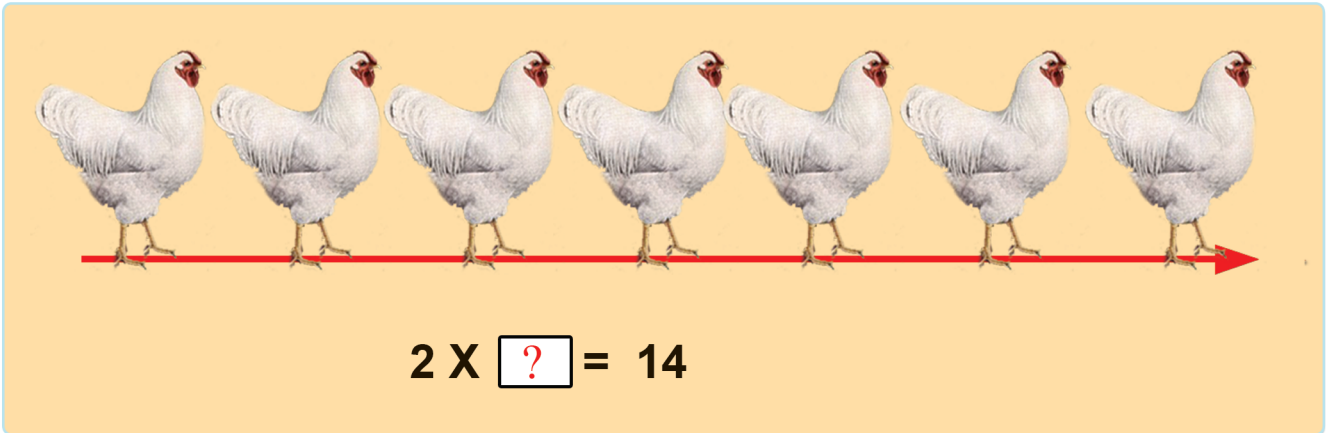

$$10 \div 2 = \boxed{?}$$

$$2 \times 5 = \boxed{?}$$



Gilgaala – 8 Hima 2f hiruu gara 2n baay'isutti jijjiiruun bakka duwwaa guutuu.

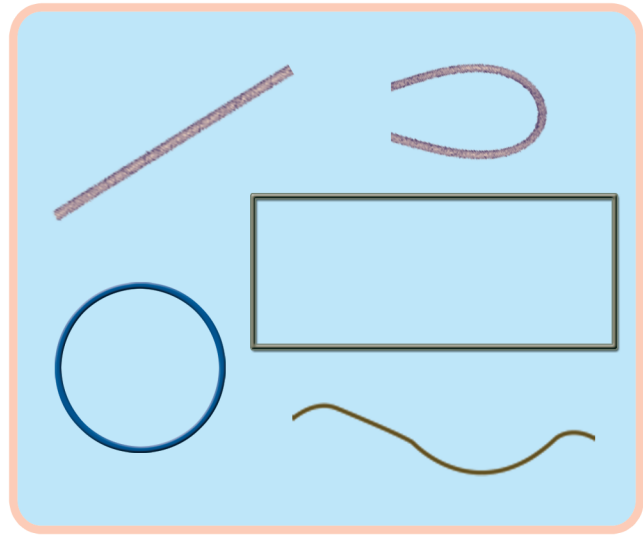
Gilgala - 9



Gilgala - 9 Piroblemota jechaa furuu.

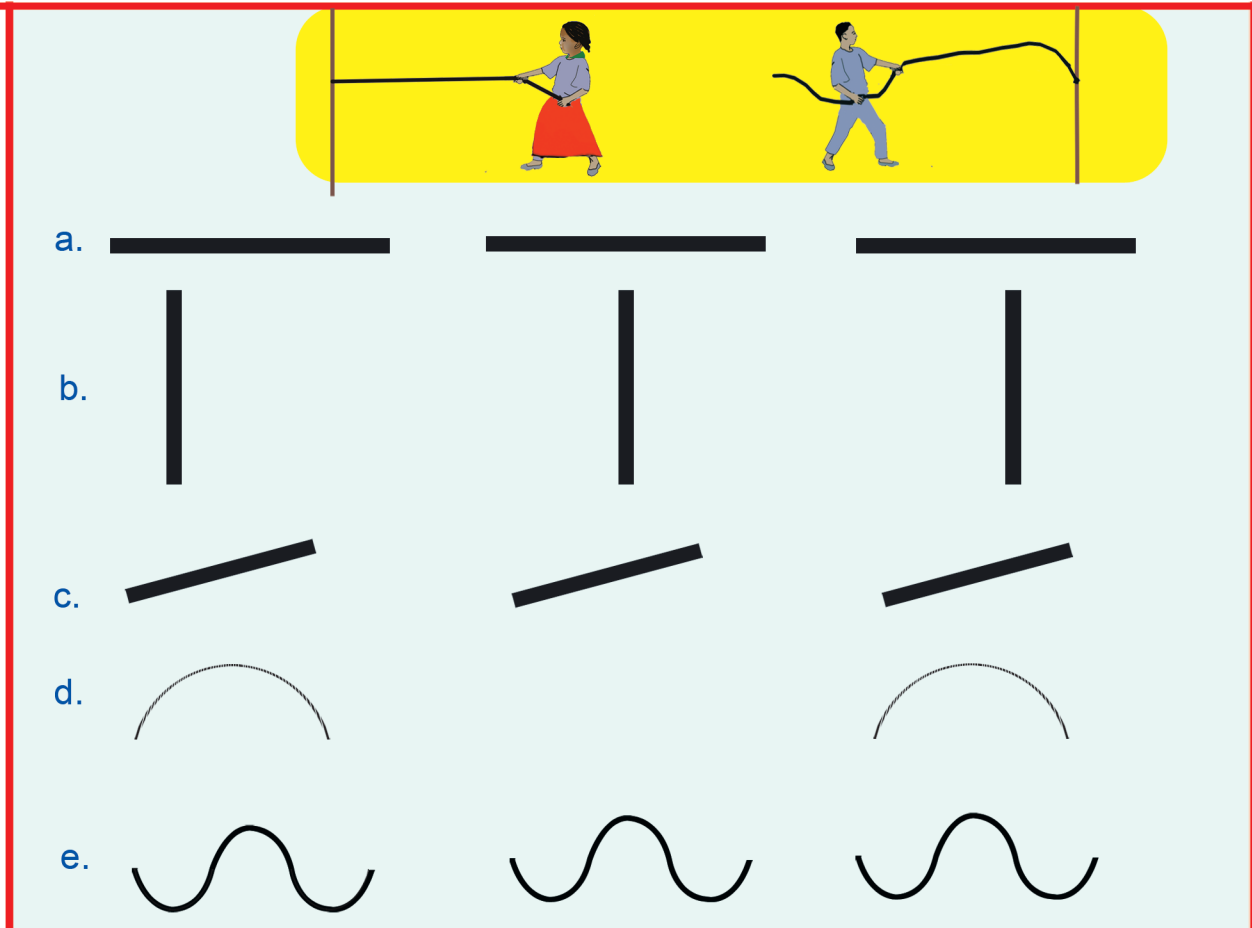
Boqonnaa 8

SARAROOTAA FI DANAALEE SASALPHOO



8.1 Sararoota qajeeloo fi sararoota Jajalloo

Gocha – 1



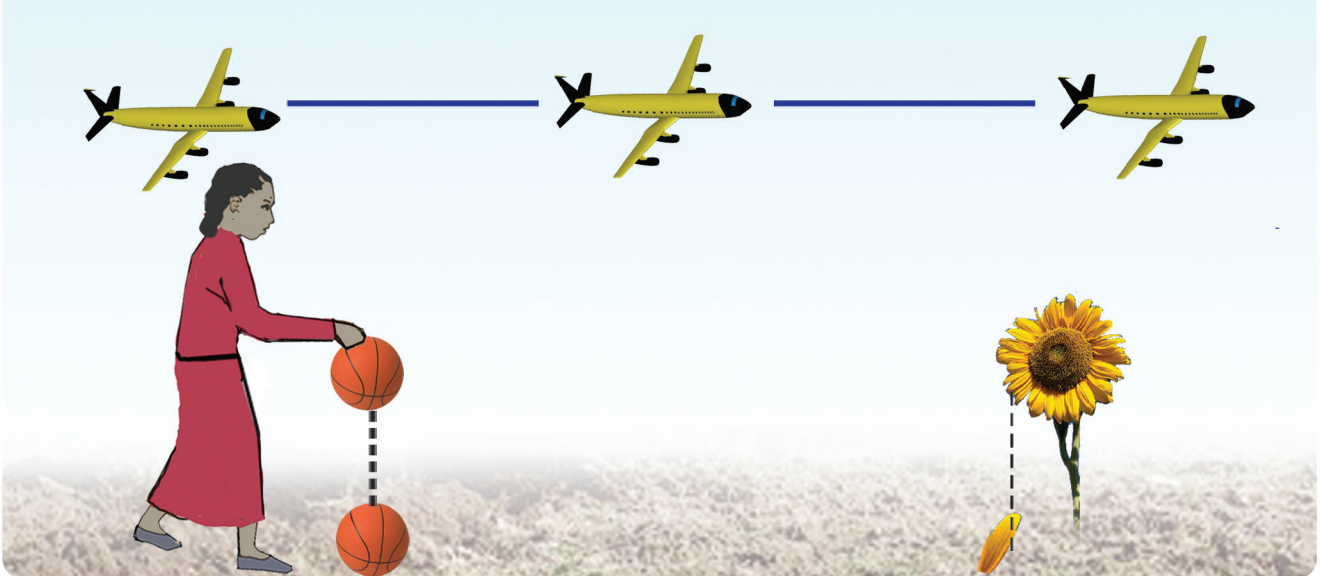

Gocha – 1

Sararoota qajeeloo fi jajalloo addaan baasuu.

- Jalqaba quba harkaan qilleensa irratti shaakaluu, boodas dabtara irratti fakkeessuu.



Gocha – 2



Gocha – 2

Daandii wantoonni irra kaatan qajeelaa yookiin dabaa jechuun addaan baasuu.

Gocha – 3


(Hojii garee) Wantoota naannootti argaman ilaaluun qajeeloo fi daddaboo jechuun qooduun gabaasa dhi'eessuu.

8.2. Danaalee Sasalphoo

Gocha – 5



Gilgaala – 3



Gocha – 5


Danaalee kennaman rogsadee, rogafree ykn geengoo jechuun addaan baasuu.

Gilgaala – 3

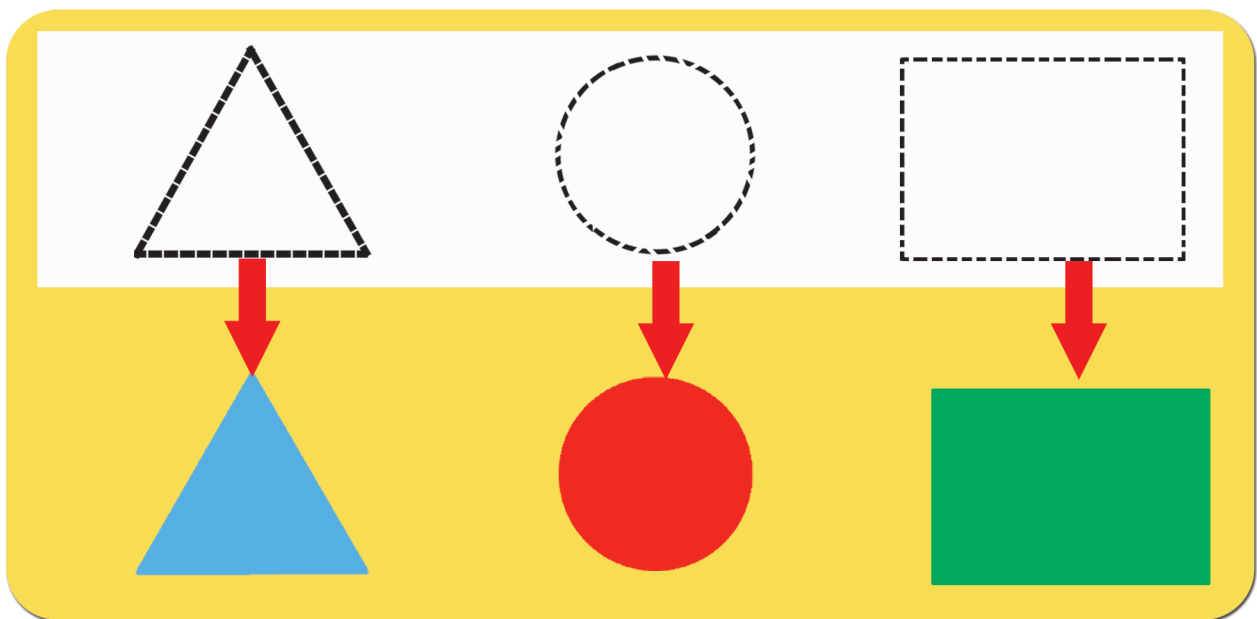
Waraqaa irraa danaalee kennaman kutuun qopheessuu.



Gilgaala – 4



Gocha – 6



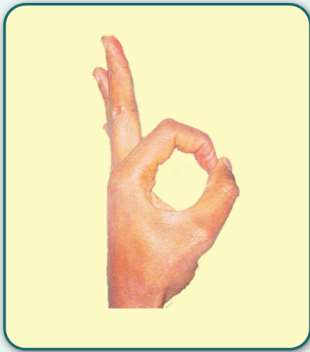


Gilgaala– 4 Wantoota naannootti argamaniin fayyadamuun rogsadee fi geengoo fakkeessuu (Dinaara, saahinaa, kubbaayyaa . . . wkf)

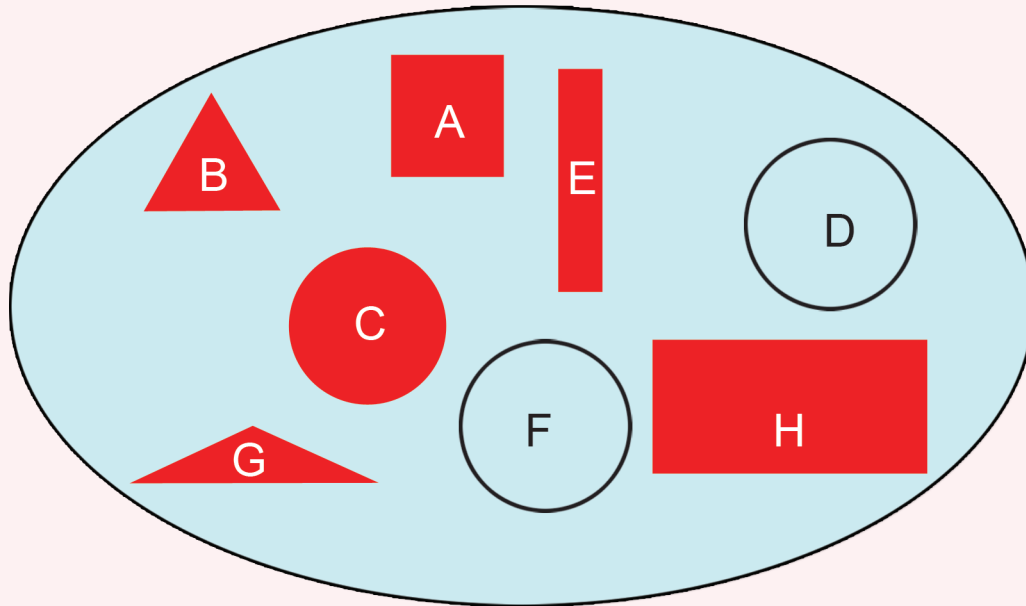
Gocha – 6 Tuqaalee waliin walqabsiisuun (gurraachessuun) danaa xiyyaan agarsiifame fakkeessuu.



Gocha – 7



Gocha – 8



rogsadee

 B

rogafree

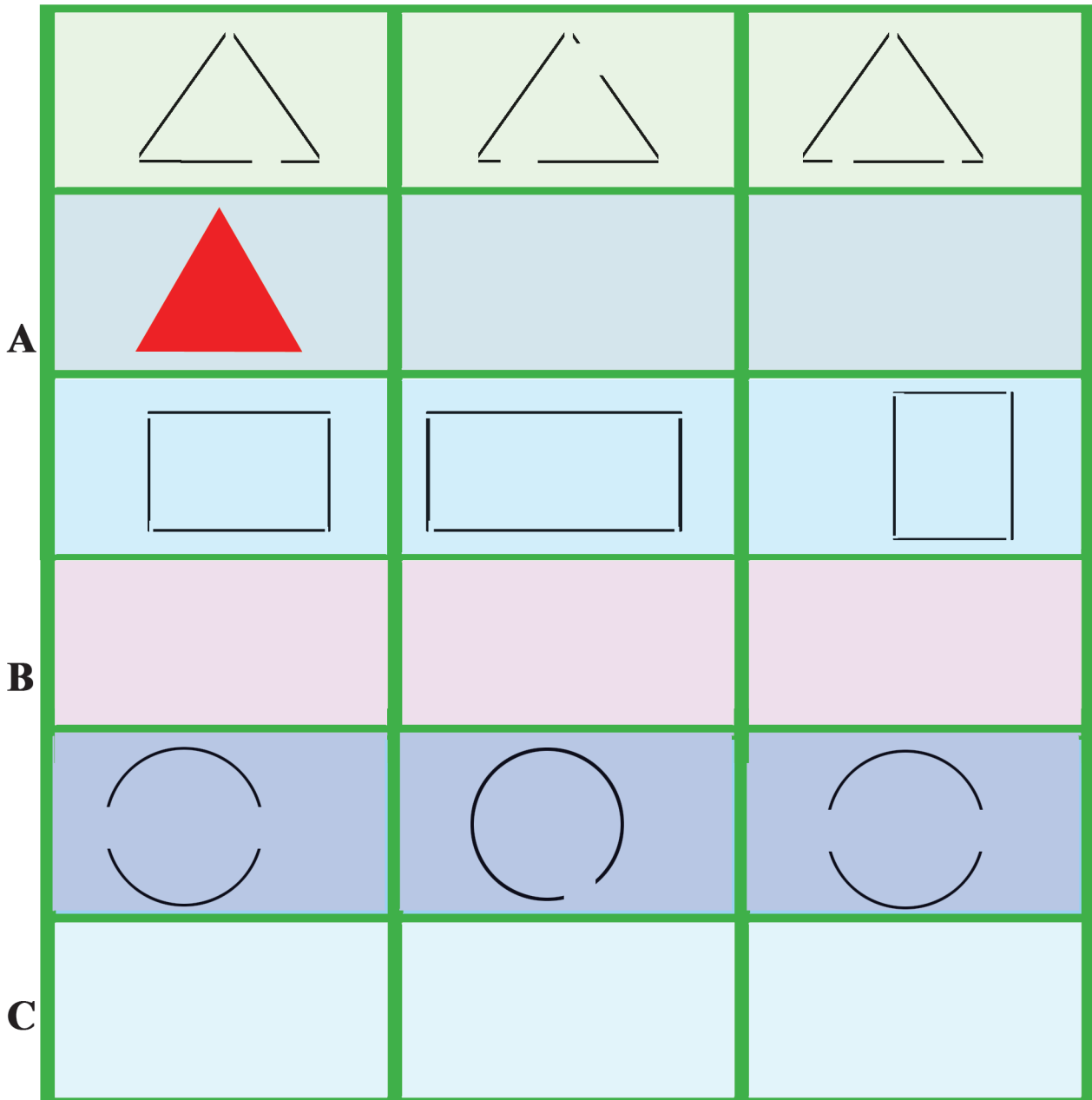
geengoo

Gocha – 7 Quba harkaatti fayyadamuun rogsadee, rogafree fi geengoo agarsiisuu.

Gocha – 8 Gareen ta'uun danaalee addaan qooduu.



Gilgaala – 5

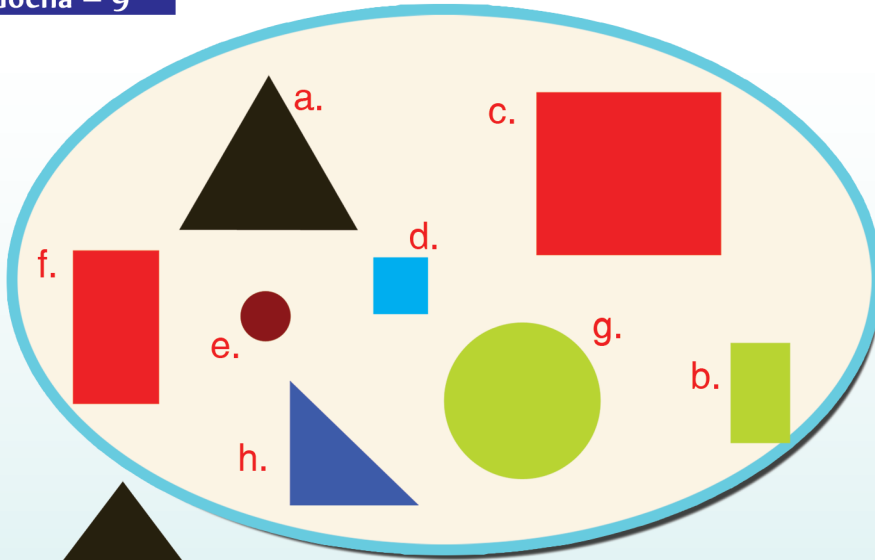


Gilgaala – 5

Sararoota addaan citan walitti qabsiisuun rogsadee, rogafree fi geengoo fakkeessuu.

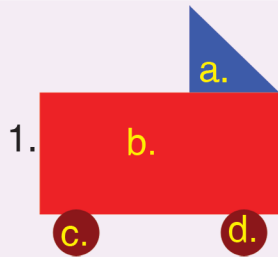


Gocha – 9




- a. rogsadee
- b. rogafree
- c. _____
- d. _____
- e. _____
- f. _____
- g. _____
- h. _____

Gilgaala – 6



- a. rog-sadee
- b. _____
- c. _____
- d. _____



Fakkii kana irra geengoo meeqatu jira? _____
 Rogsadee meeqatu jira? _____
 Rogafree meeqatu jira? _____

Gocha – 9


Danaalee geengoo keessaa rogsadee, rogafree fi geengoo jechuun addaan baasuu.

Gilgaala – 6

1. Danaa kana hojjechuuf danaalee kamitti akka fayyadaman himuu.
2. Baay'ina rogsadee, rogafree fi geengoo dubbachuu fi barreessuu.

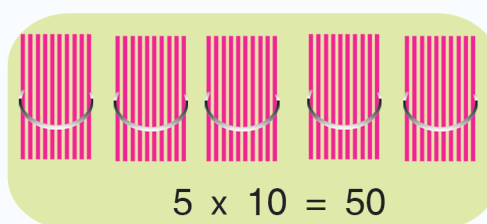
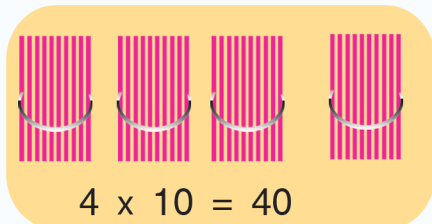
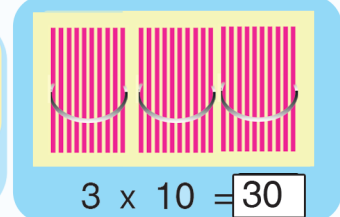
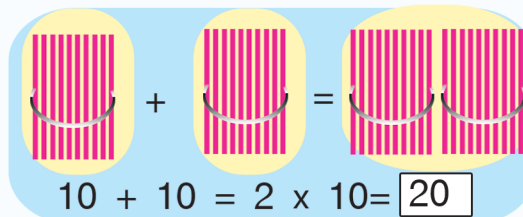
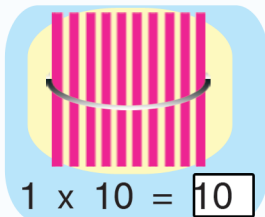
Boqonnaa 9

LAKKOOF SOTA HUNDAA
HAMMA 10OTTI



9.1 Baay'attoota 10 hamma 100tti


Gocha - 1




Gilgaala - 1



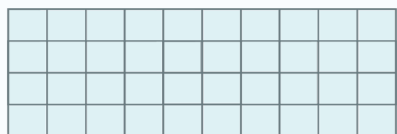
$1 \times 10 = 10$



$2 \times 10 = 20$



$\square \times \square = \square$



$\square \times \square = \square$


Gocha - 1

Muka kudhan kudhaniin hidhame lakkaa'uun baay'attoota 10 addaan baasuu.


Gilgaala - 1

Iskuweerota lakkaa'uun bakka duwaa hima baay'isuutiin guutuu.

Gocha – 2




$10 + 10$	$<$	$10 + 10 + 10$
2×10	$<$	3×10
2	$<$	3
20	$<$	30



$10 + 10 + 10 + 10$	$<$	$10 + 10 + 10 + 10 + 10$
4×10	$<$	5×10
4	$<$	5
40	$<$	50

Gilgaala – 2

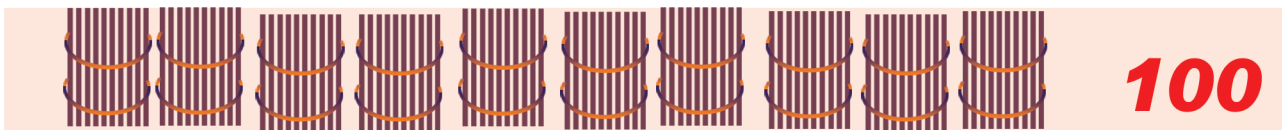
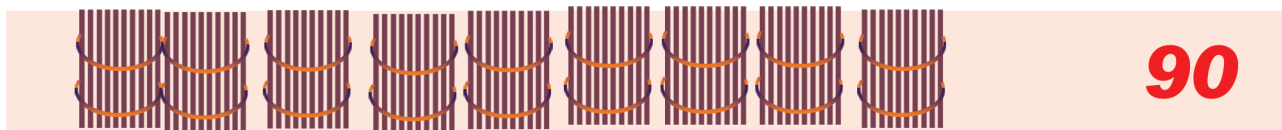
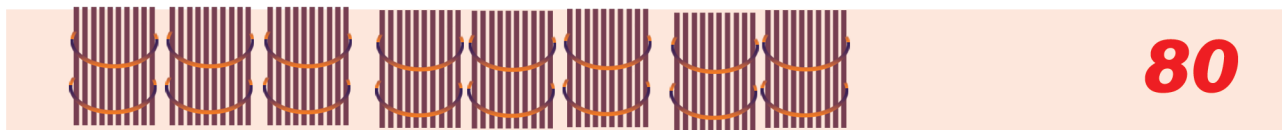
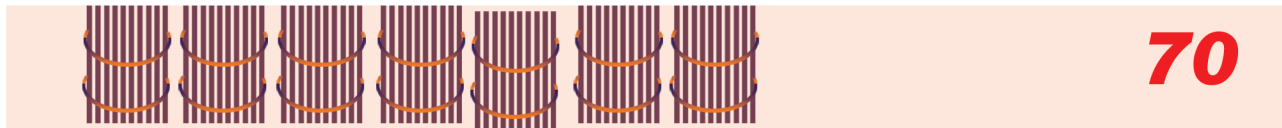
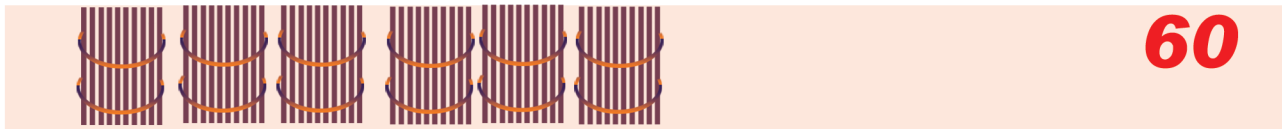


$60 > 40$	70 ? 80
$6 > 4$	90 ? 20
$6 \times 10 > 4 \times 10$	40 ? 4×10
50 ? 30	

Gocha – 2 Hidhaa mukaan fayyadamuun baay’attoota 10 waliin madaaluu.
Gilgaala – 2 Fakkeenya kenname hordofuun mallattoolee hariiroo bakka duwwaatti barreessuu.



Gilgaala – 3



10	20	30				70		90	
1X10	2X10	3X10		5X10				9X10	

2. Dalga baay'isuu

$$3 \times 10 = \boxed{?}$$

$$5 \times 10 = \boxed{?}$$

$$9 \times 10 = \boxed{?}$$

$$8 \times 10 = \boxed{?}$$

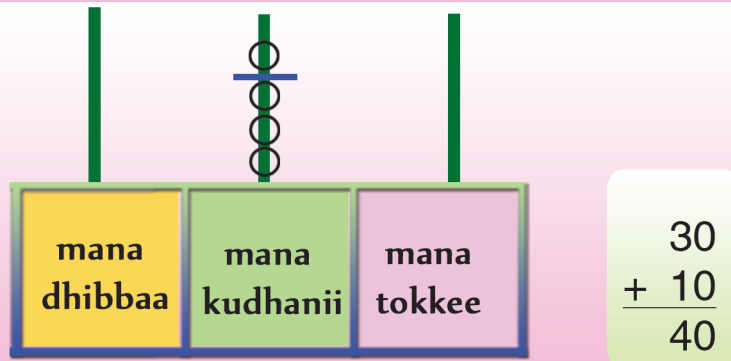
$$4 \times 10 = \boxed{?}$$

$$7 \times 10 = \boxed{?}$$

Gilgaala – 3 Bakka duwwaa gabatee irraa guutuu. Dalga baay'isuu.

Gocha – 3

Abaakasii



Gabatee ida'uu

$$40 + 20 = \boxed{60}$$

$$\begin{array}{r} 40 \rightarrow \boxed{} \\ + 20 \rightarrow \boxed{} \\ \hline 60 \rightarrow \boxed{} \end{array}$$

+	mana Kudhanii	mana tokkee
	4	0
	2	0
	6	0

Ida'amaa

Ida'amaa

Ida'ama



Gilgaala – 4

$$30 + 40 = \boxed{?}$$

$$60 + 20 = \boxed{?}$$

$$20 + 70 = \boxed{?}$$

$$90 + \boxed{?} = 100$$

Gocha – 3

Abaakasii fi gabatee ida'uuttii fayyadamuun ida'amni sirrii ta'uu mirkaneeffachuu.

Gilgaala – 4

Abaakasii yookiin gabatee ida'uutti gargaaramuun shallaguu.

0

1

2

3

4

5

6

7

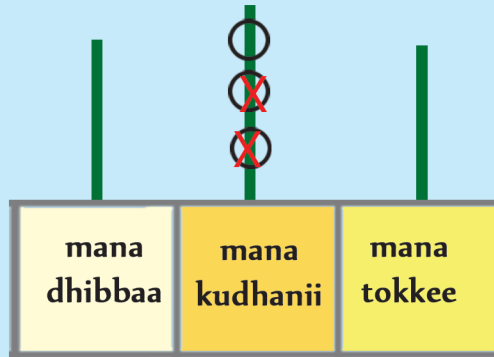
8

9

10

Gocha – 4

Abaakasii



$$\begin{array}{r} 30 \\ -20 \\ \hline 10 \end{array}$$

Gabatee hir'isuu

$$90 - 30 = \boxed{60}$$

	mana kudhanii	mana tokkee
9	0	Hir'ataa
3	0	Hir'isaa
6	0	caalmaa



Gilgaala – 5

$$40 - 30 = \boxed{?}$$

$$60 - 20 = \boxed{?}$$

$$70 - \boxed{?} = \boxed{20}$$

Gocha – 4

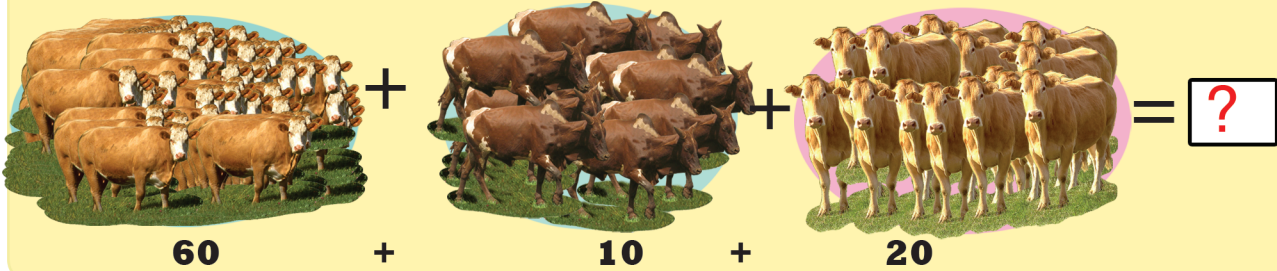
Abaakasii fi gabatee hir'isuutti fayyadamuun caalmaa barbaaduu.

Gilgaala – 5


Abaakasii yookiin gabatee ida'uutti fayyadamuun caalmaa shallaguu.

Gilgaala – 6 Hojii garee

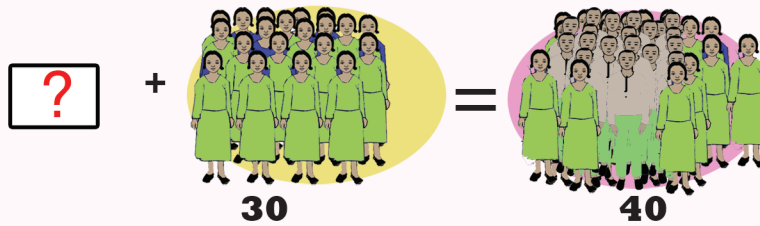
1. Mooraa horsiisee bulaa tokko keessa saawwan 60, jiboota 10 fi jabbootni 20 yoo jiraatan, waliigalatti horii meeqatu jira ?



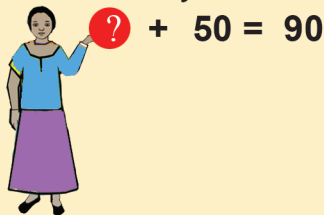
2. Iddoo walga'ii tokkotti dubartoota 80 fi dhiira 20tu argama. Waliigalatti namoota meeqatu argame?



3. Daree tokko keessa barattoota 40tu jira. Isaan keessaa barattoonni 30 dubaroota. Baay'inni barattoota dhiiraa meeqa?



4. Ani lakkoofsa 50 yoo ana irratti dabalani 90 ta'a. Ani meeqa?





9.2 Lakkoofsota hundaa 21 hamma 100tti jiran

Gocah – 5

$10 + 1 = 11$

$10 + 3 = \square$

$20 + 2 = \square$

$\square + \square = \square$

$\square + \square = \square$

mana dhibbaa	mana kudhanii	mana tokkee

mana dhibbaa	mana kudhanii	mana tokkee

$20 + 3 = 23$
 $2 \times 10 + 3 = 23$

$54 = 50 + 4 = 5 \times 10 + 4$

Gilgaala – 7

$10 + 9 = \square$

$\square + 60 = 65$

$30 + 7 = \square$

$7 + \square = 97$

Gocha – 5

Uleewwan kudhaniin hidhamanii fi uleewwan hin hidhamin (1-9) tti yookiin abaakasiitti fayyadamuun ida'uu.

Gilgaala – 7

Bakka duwwaa lakkoofsa sirrii ta'een guutuu.

Gocha – 6

A 3x3 grid of numbers is shown on a black background. Red arrows point from each number to a mathematical expression or a blank box. The grid contains the following numbers:

19	67	59
27	35	77
94	80	63

The arrows point to the following expressions and boxes:

- From 19: $20+7$
- From 67: $60+7$
- From 59: $70+7$
- From 27: $20+7$
- From 35: $30+5$
- From 77: $30+5$
- From 94: $20+7$
- From 80: $80+0$
- From 63: $60+3$

Gilgaala – 8

1. $43 = 40 + 3$

2. $59 = \square + \square$

3. $78 = \square + \square$

4. $\square = 80 + 8$

5. $17 = \square + \square$

Gocha – 6

Lakkoofsa dijiitii 2 akka ida'ama baay'ataa 10 fi tokkeewwaniin barreessuu.

Akkuma fakkeenya kennameetti bakka duwwaa guutuu.

Gilgaala – 8

Lakkoofsota dijiitoota lamaa, baay'attoota 10 fi tokkeewwaniin ibsuu. Haaluma fakkeenya kennameetiin bakka duwwaa guutuu.



9.3 Tartiiba lakkoofsota hundaa hamma 100tti jiranii

Gocha – 7

1. 21 22 23 24 25 26 27 28 29 30

2. 34 37 41 43

3. 49 53 58

4. 57 62 65

Gilgaala – 9

1. 73, 72, 78, 76
72 < 73 < 76 < 78

3. 18, 26, 19, 29, 32

2. 31, 13, 62, 27

4. 75, 82, 99, 80

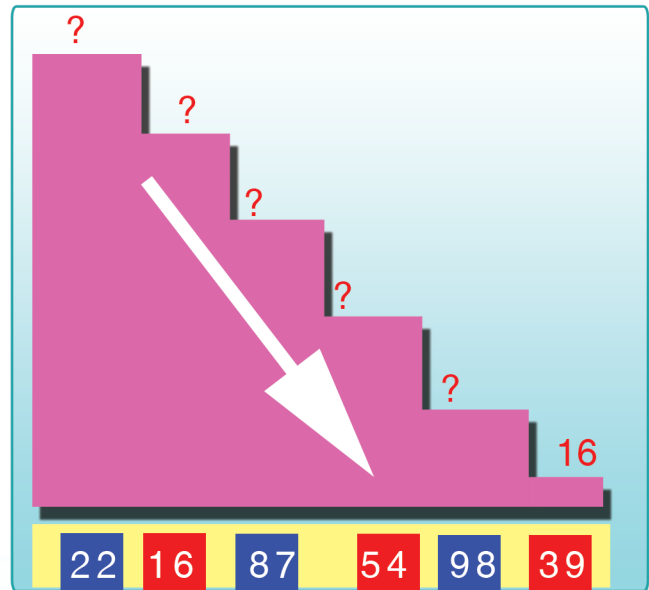
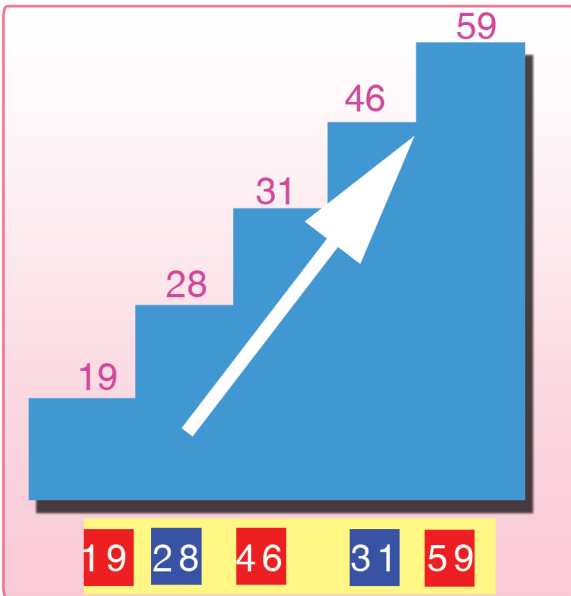
Gocha – 7 Tartiiba lakkoofsotaa irratti hundaa'uun bakka duwwaa guutuu.

Gilgaala – 9 Akka fakkeenyaan kennametti tartiibaan kaa'uu.

Gocha – 8

1	2	3	4	5		7	8	9	10
11	12	13	14	15	16	17	18	19	20
	22	23		25	26	27	28	29	
31	32	33	34	35	36	37	38		40
41		43	44	45	46	47			50
51	52	53	54	55	56			59	
61	62	63	64	65		67	68	69	
71	72	73			76	77	78		80
81	82	83	84	85	86	87	88		90
91		93	94	95		97		99	100

Gilgaala – 10



Gocha– 8

Bakka duwaa gabatee irraa tartiiba lakkoofsotaa eeguun guutuu fi dubbisuu.

Gilgaala –10

Gara gadiitii egaluun xiqqaa iraa gara guddaatti tartiibaan gara oliitti barreessuu.



Gocha – 9

19	20
----	----

?	22
---	----

?	27
---	----

?	70
---	----

?	76
---	----

?	79
---	----

?	85
---	----

?	62
---	----

?	40
---	----

29	30
----	----

33	?
----	---

49	?
----	---

62	?
----	---

67	?
----	---

77	?
----	---

94	?
----	---

55	?
----	---

69	?
----	---

24	25	26
----	----	----

35	?	37
----	---	----

43	?	45
----	---	----

58	?	60
----	---	----

81	?	83
----	---	----

96	?	98
----	---	----

45	?	47
----	---	----


75	?	77
----	---	----

51	?	53
----	---	----

Gocha – 9

Duursaa lakkoofsa kennamee barbaadduu, itti fufaa lakkoofsa kennamee barbaadduu fi lakkoofsa lakkoofsota lamaan kennaman giddutti argamu barbaadduu.

Gocah – 10



Gilgaala -11



Caaltuu

Tulluu

Turaa

Faaxumaa

Caaltuu _____ 1^{ffaa}

Tulluu _____

Turaa _____

Faaxumaa _____

Gocha – 10

Atileetota halluu uffata isaaniitiin sadarkaa isaanii tartiibaan ibsuu.

Gilgaala – 11

Sadarkaa namoota hiriiraniibsuu. Maqaa isaanii cinaatti sadarkaa isaanii barreessuu.

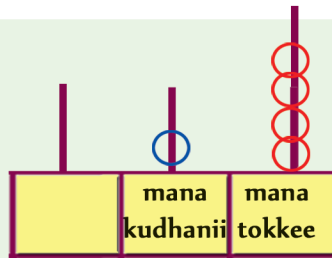


9.4 Mana lakkoofsotaa hamma 100tti

Gocha –II

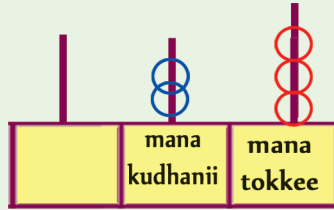
Abaakasii

14



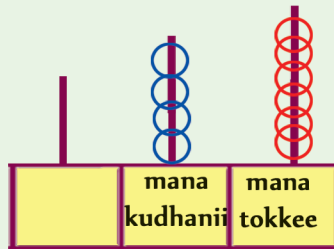
mana kudhanii	mana tokkee
1	4

23



mana kudhanii	mana tokkee
2	3

47



mana kudhanii	mana tokkee
4	7

Diddiriirsuu

$$25 = 2 \times 10 + 5$$

$$96 = 9 \times 10 + 6$$

Lakkoofsa	mana kudhanii	mana tokkee
25	2	5
96	9	6

Gilgaala – 12

Lakkoofsa	mana kudhanii	mana tokkee
75	7	5
69		
44		
86		

Gocha – 14

Mana tokkee fi mana kurnanii lakkoofsotaa abakasiin yookiin diddiriirsuun addaan baafachuun akka danda'amu hubachuu.

Gilgaala– 12

Gabatee kenname irratti mana tokkee fi mana kurnanii lakkoofsotaa guutuu.

Boqonnaa 10

MAALLAQA ITOOPHIYAA



10.1 Dinaarotaa fi Nootiiwwan

Gocha – 1























Gocha – 1 Haala fakkeenya kennameetiin walitti firoomsuu.






























10.2 Hariiroo saantimaa fi Qarshii

Gilgaala - 1

 +  = 15 S	 +  +  = _____ S
 +  = _____ S	 +  +  +  = _____ S
 +  = _____ S	 +  +  +  +  = _____ S
 +  = _____ S	

Gilgaala - 2

Gilgaala - 1 Saantimoota ida'uu.

Gilgaala - 2 Walitti firoomsuu.



Gocha – 2



Gocha – 2

Noottiiwwan addaan baafachuu fi maqaa (gatii) isaanii himuu.

**Gilgaala – 3**

Daraartuu



Caaltuu




Tolaa



Beekaa

**Gilgaala – 3** Beekaan saantima meeqa qaba?

- Abbaa saantima 50 qofa kan qabu eenyu?
- Abbaa saantima 5 baayyee kan qabu eenyu?
- Abbaa saantima 25 baayyee kan qabu eenyu?
- Abbaa saantima 10 kan hin qabne eenyu?
- Abbaa qarshii 1 kan qabu eenyu?



Gilgaala – 4



Qarshii 5



Qarshii 2



Qarshii 1



Qarshii 2



Qarshii 4



Saantima 50

Gilgaala – 4

Gatiin dabtara 1 fi qubeessaa 1 meeqa?
Gatiin dabtara 3 fi qalama 2 meeqa ta'a?


Boqonnaa 11

YEROO



11.1 Qoqqoodama Guyyaa

Gocha – 1



Gocha – 1 Fakkiiwan mul'atan guyyaa tokkoo keessaa yeroo kam akka ta'e himuu, (Ganama, waaree booda, galgala, halkan) .

**Gilgaala – 1****Gilgaala – 2**

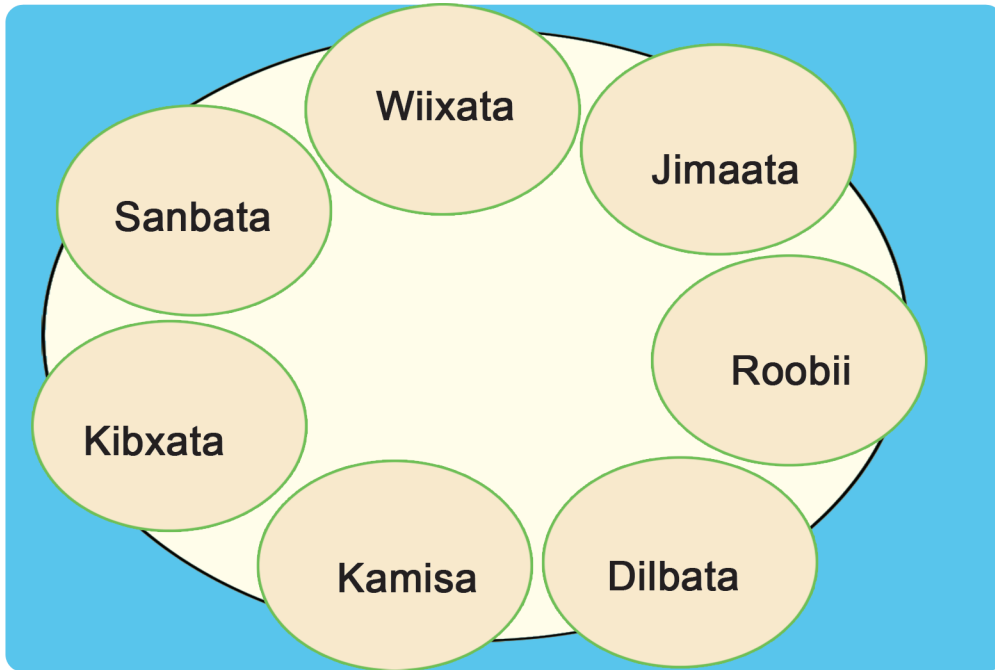
Gilgaala – 1 Sa'aatii ilaaluun yeroo isaa himuu.

Gilgaala – 2 Fakkii sa'aatii kaasuun yeroo irratti agarsiisuu.

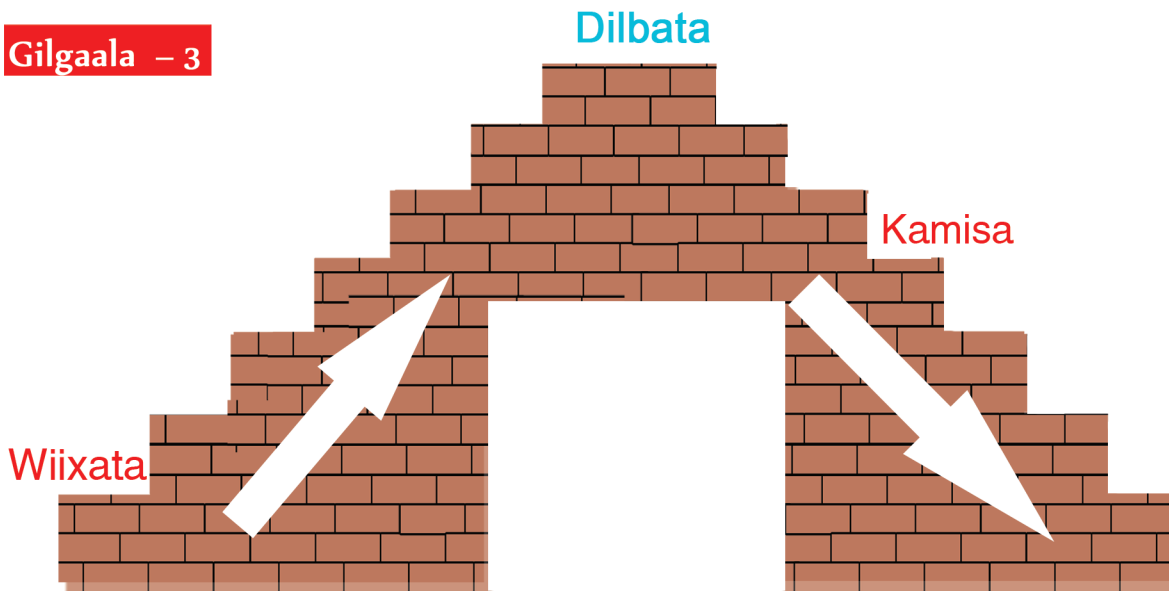


11.2 Guyyoota torbanii

Gocha – 2



Gilgaala – 3



Gocha – 2

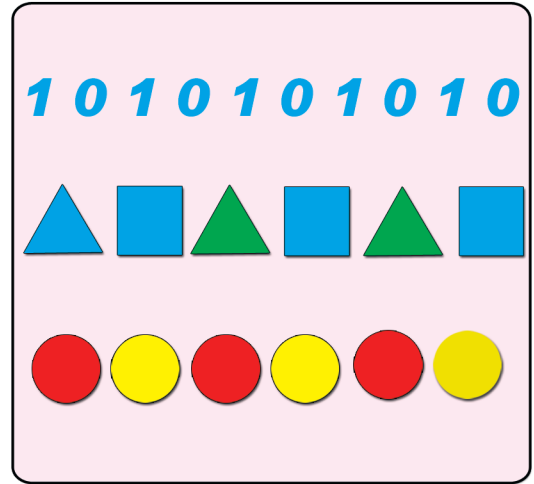
Guyyaan barumsi itti jalqabamu kami? Guyyoonni boqonnaa isaan kami?

Gilgaala – 3

Sadarkaa mul'atu kana qubee jalqabaa maqaa guyyoota torbaniin moggaasuu.

Boqonnaa 12

Qabannaa Daataa fi
paatarnii





12.1 Giraafota fakkii Sasalphoo






Gocha – 1



Gocha – 1 Fakkiiwwan ilaaluun haala qilleensa guyyaa ibsuu. (Aduu, duumessaa fi rooba)

Gocha -2



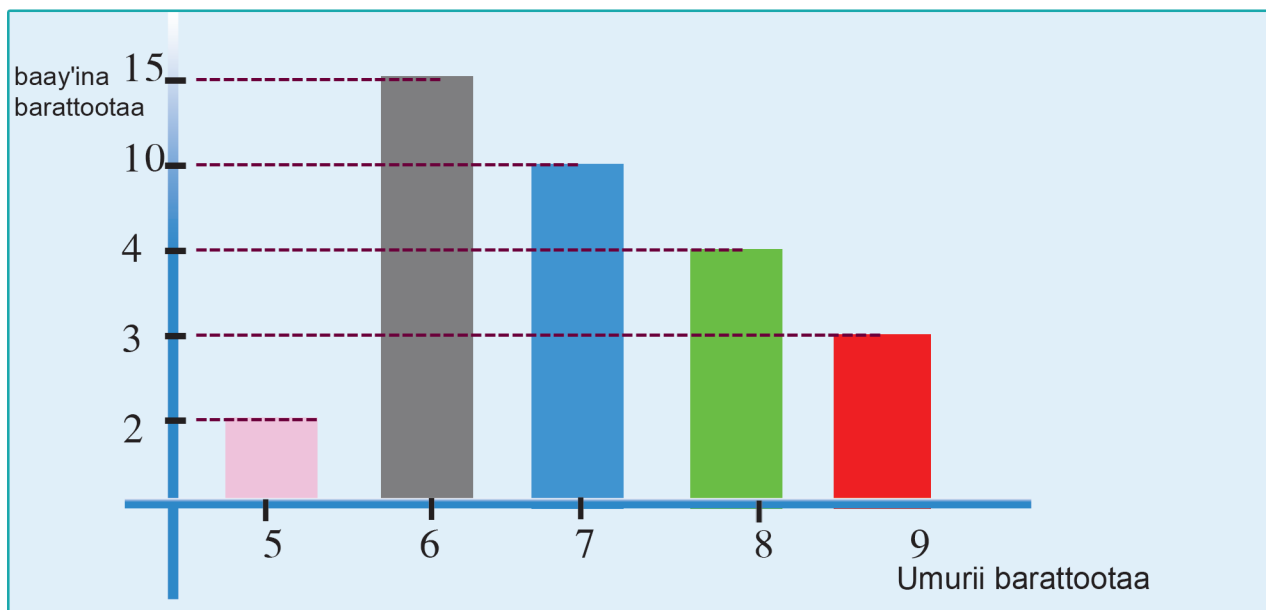
				
	Re'oota	Hoolota	Fardeen	Loon
Baay'ina Sararaan (taaliin)				
Baay'ina Lakkoofsaan	7			

Gocha - 2 Beeladoota lakkaa'uun taalii fi lakkoofsaan ibsuu.

10 100 1000 10000 100000 1000000 10000000

Gocha -3

Giraafii baay'ina barattoota kutaa tokkoffaa mul'isu



Umurii	5	6	7	8	9
Taaliin					
Lakkoofsaan					

Gocha -3

Baay'ina barattootaa taalii fi lakkoofsaan agarsiisuu.


12.2 Paatarnii

Gocha – 4

(Hojii garee)

1, 0, 1, 0, 1, 0, 1, 0 _____

2, 4, 6, _____



1, 3, 5, _____

3, 6, 9, _____



Gocha – 4

Fakkiiwwanii fi lakkoofsota kennaman itti fufuu.

